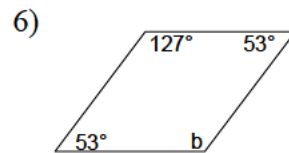
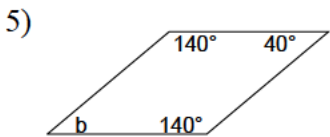
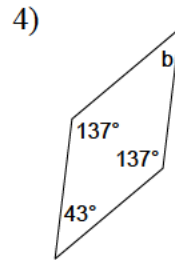
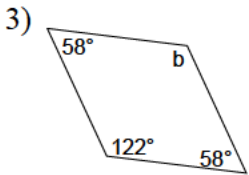
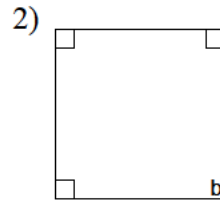
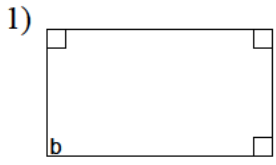
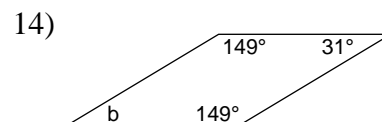
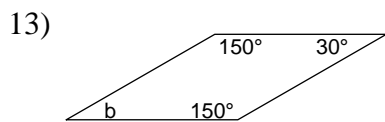
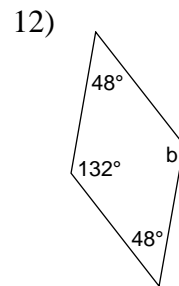
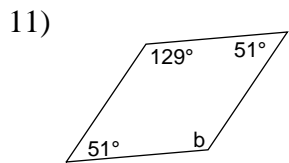
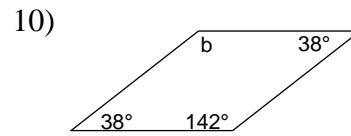
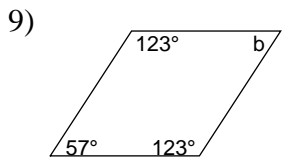
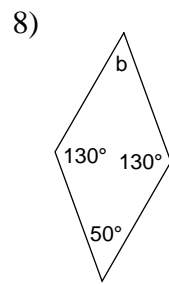
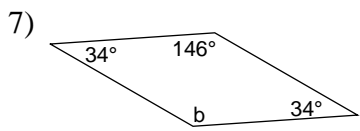


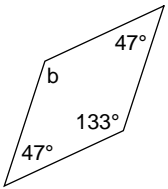
## Quadrilaterals - angles

Find the measure of angle b.

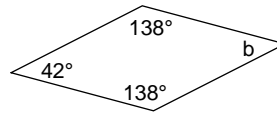




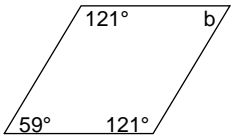
15)



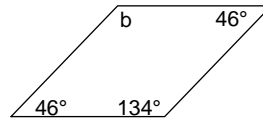
16)



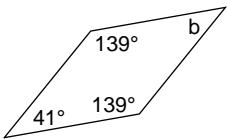
17)



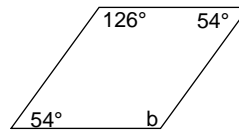
18)



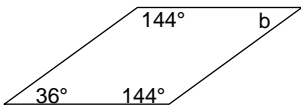
19)



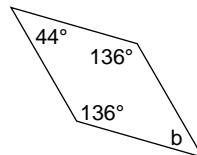
20)



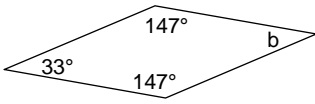
21)



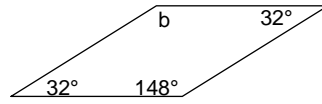
22)



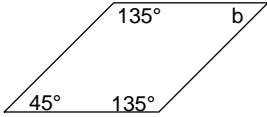
23)



24)



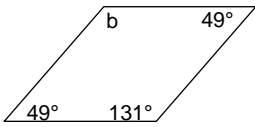
25)



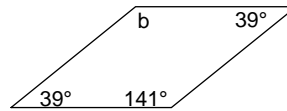
26)



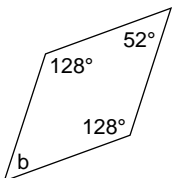
27)



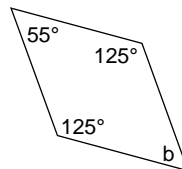
28)



29)



30)



## Answers to Quadrilaterals - angles

- 1)  $90^\circ$
- 5)  $40^\circ$
- 9)  $57^\circ$
- 13)  $30^\circ$
- 17)  $59^\circ$
- 21)  $36^\circ$
- 25)  $45^\circ$
- 29)  $52^\circ$

- 2)  $90^\circ$
- 6)  $127^\circ$
- 10)  $142^\circ$
- 14)  $31^\circ$
- 18)  $134^\circ$
- 22)  $44^\circ$
- 26)  $143^\circ$
- 30)  $55^\circ$

- 3)  $122^\circ$
- 7)  $146^\circ$
- 11)  $129^\circ$
- 15)  $133^\circ$
- 19)  $41^\circ$
- 23)  $33^\circ$
- 27)  $131^\circ$

- 4)  $43^\circ$
- 8)  $50^\circ$
- 12)  $132^\circ$
- 16)  $42^\circ$
- 20)  $126^\circ$
- 24)  $148^\circ$
- 28)  $141^\circ$