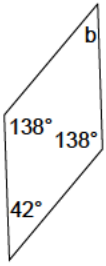


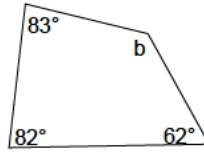
## Quadrilaterals - angles

Find the measure of the angle  $b$  for each of the quadrilaterals.

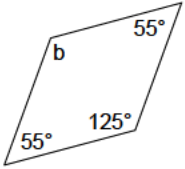
1)



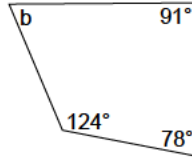
2)




3)



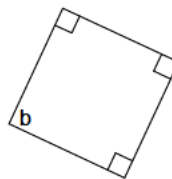
4)



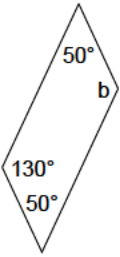
5)



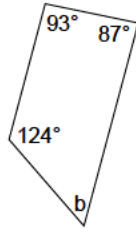
6)



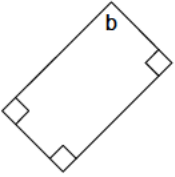
7)



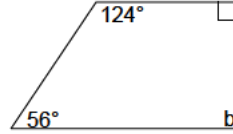
8)



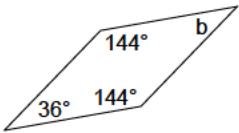
9)



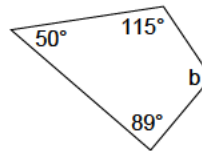
10)



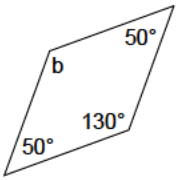
11)



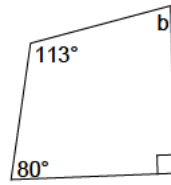
12)




13)




14)



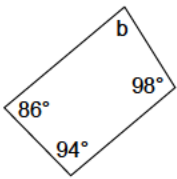
15)



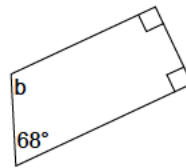
16)



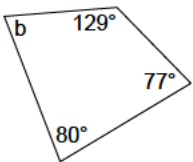
17)



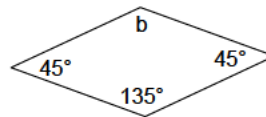
18)



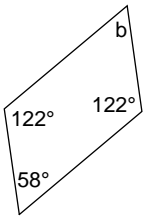
19)



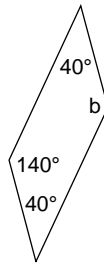
20)



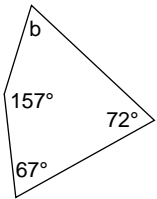
21)



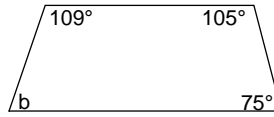
22)



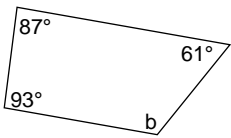
23)



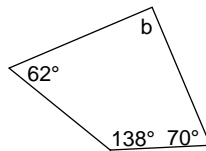
24)



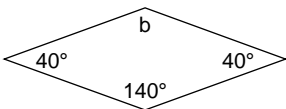
25)



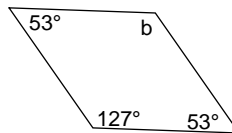
26)



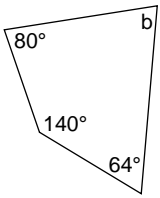
27)



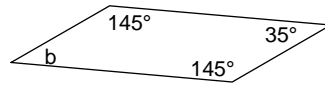
28)



29)



30)



## Answers to Quadrilaterals - angles

- 1)  $42^\circ$
- 5)  $143^\circ$
- 9)  $90^\circ$
- 13)  $130^\circ$
- 17)  $82^\circ$
- 21)  $58^\circ$
- 25)  $119^\circ$
- 29)  $76^\circ$

- 2)  $133^\circ$
- 6)  $90^\circ$
- 10)  $90^\circ$
- 14)  $77^\circ$
- 18)  $112^\circ$
- 22)  $140^\circ$
- 26)  $90^\circ$
- 30)  $35^\circ$

- 3)  $125^\circ$
- 7)  $130^\circ$
- 11)  $36^\circ$
- 15)  $148^\circ$
- 19)  $74^\circ$
- 23)  $64^\circ$
- 27)  $140^\circ$

- 4)  $67^\circ$
- 8)  $56^\circ$
- 12)  $106^\circ$
- 16)  $59^\circ$
- 20)  $135^\circ$
- 24)  $71^\circ$
- 28)  $127^\circ$