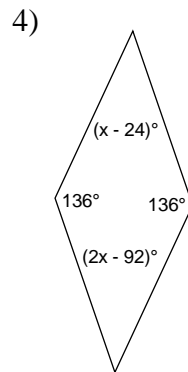
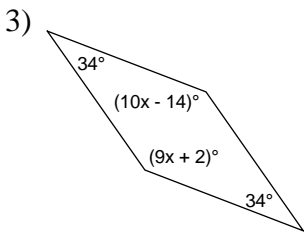
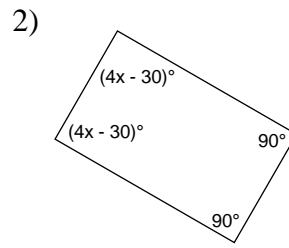
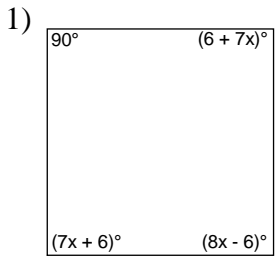
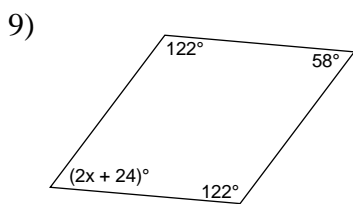
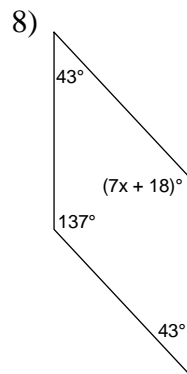
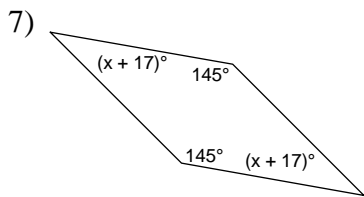
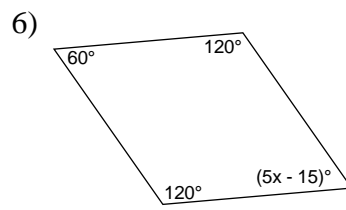
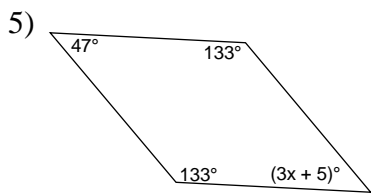


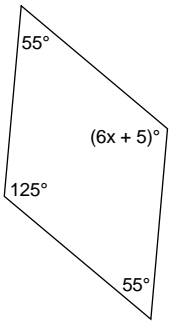
# Quadrilaterals - equations

Find the value of  $x$  for each given quadrilateral.

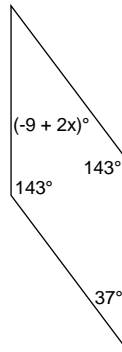




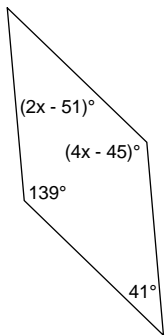
10)



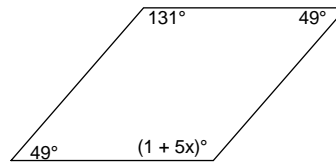
11)



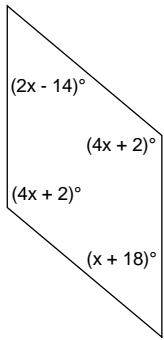
12)



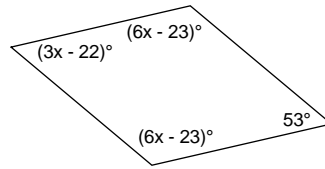
13)



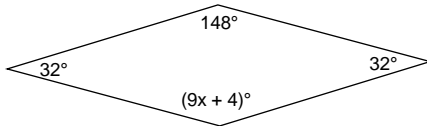
14)



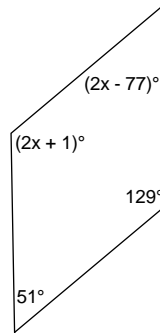
15)



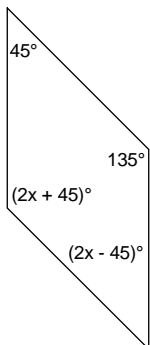
16)



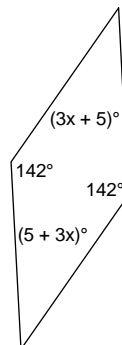
17)



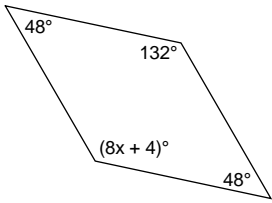
18)



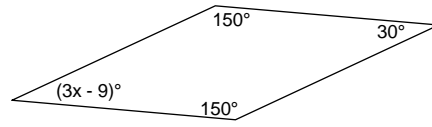
19)



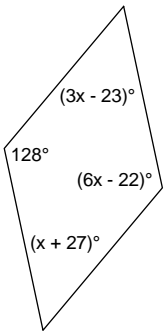
20)



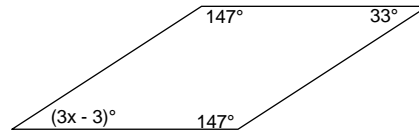
21)



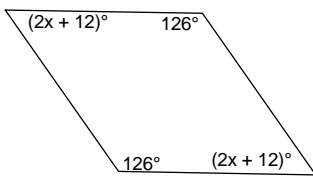
22)



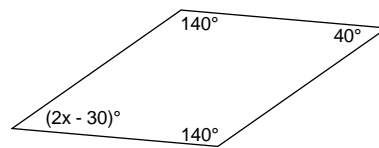
23)



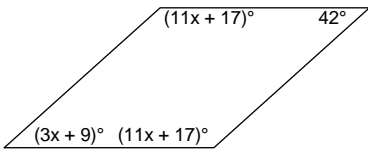
24)



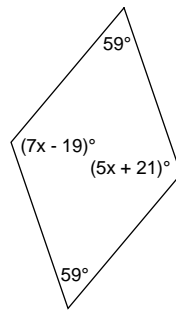
25)



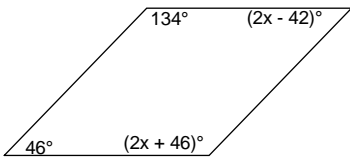
26)



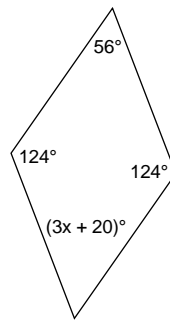
27)



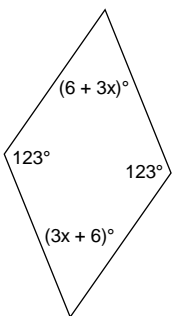
28)



29)



30)



## Answers to Quadrilaterals - equations

- |        |        |        |        |
|--------|--------|--------|--------|
| 1) 12  | 2) 30  | 3) 16  | 4) 68  |
| 5) 14  | 6) 15  | 7) 18  | 8) 17  |
| 9) 17  | 10) 20 | 11) 23 | 12) 46 |
| 13) 26 | 14) 32 | 15) 25 | 16) 16 |
| 17) 64 | 18) 45 | 19) 11 | 20) 16 |
| 21) 13 | 22) 25 | 23) 12 | 24) 21 |
| 25) 35 | 26) 11 | 27) 20 | 28) 44 |
| 29) 12 | 30) 17 |        |        |