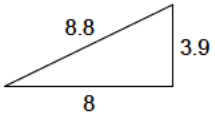




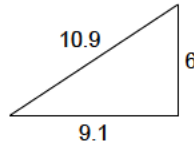
# Pythagorean theorem - decimals

Determine whether the lengths form a right triangle.

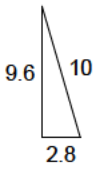
1)



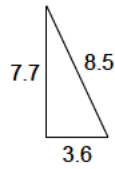
2)



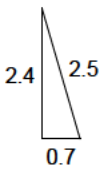
3)



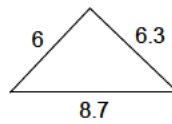
4)



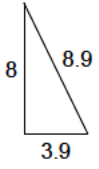
5)



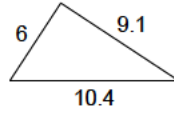
6)



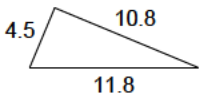
7)



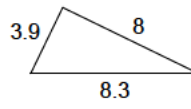
8)



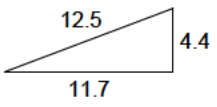
9)



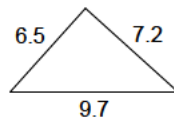
10)



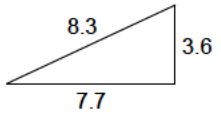
11)



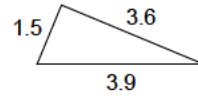
12)



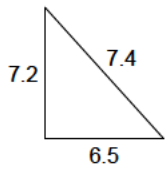
13)



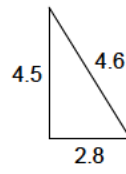
14)



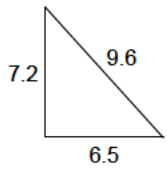
15)



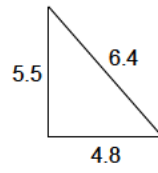
16)



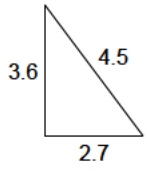
17)



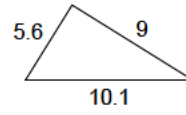
18)



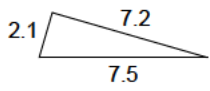
19)



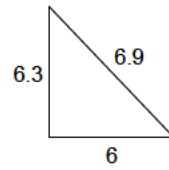
20)



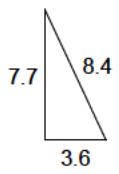
21)



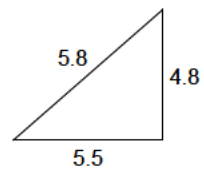
22)



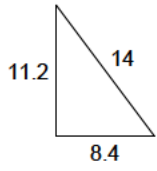
23)



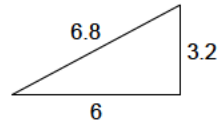
24)



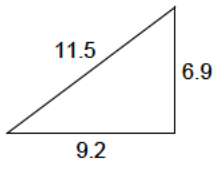
25)



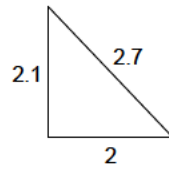
26)



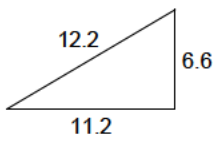
27)



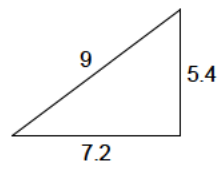
28)



29)



30)



## Answers to Pythagorean theorem - decimals

- |         |         |         |         |
|---------|---------|---------|---------|
| 1) No   | 2) Yes  | 3) Yes  | 4) Yes  |
| 5) Yes  | 6) Yes  | 7) Yes  | 8) No   |
| 9) No   | 10) No  | 11) Yes | 12) Yes |
| 13) No  | 14) Yes | 15) No  | 16) No  |
| 17) No  | 18) No  | 19) Yes | 20) No  |
| 21) Yes | 22) No  | 23) No  | 24) No  |
| 25) Yes | 26) Yes | 27) Yes | 28) No  |
| 29) No  | 30) Yes |         |         |