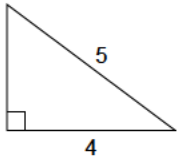


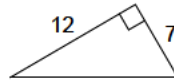
# Pythagorean theorem - integers

Calculate the length of the missing side.

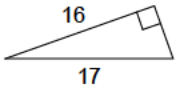
1)



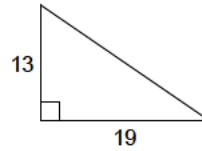
2)



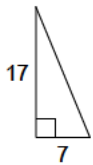
3)



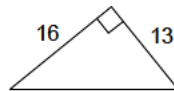
4)



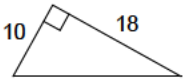
5)



6)



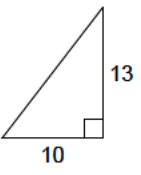
7)



8)



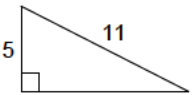
9)



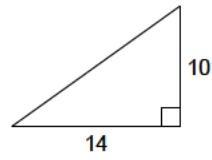
10)



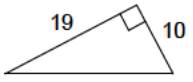
11)



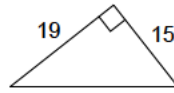
12)



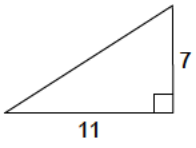
13)



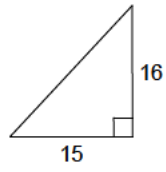
14)



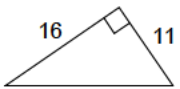
15)



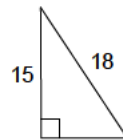
16)



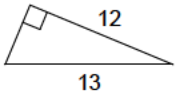
17)



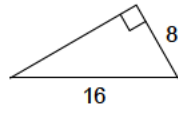
18)



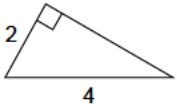
19)



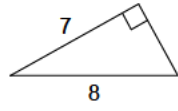
20)



21)



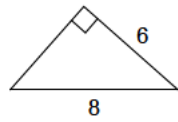
22)



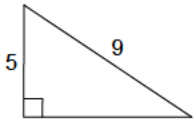
23)



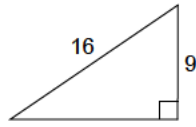
24)



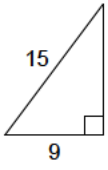
25)



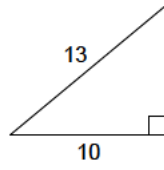
26)



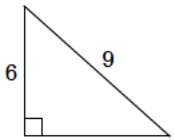
27)



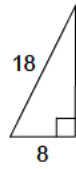
28)



29)



30)



## Answers to Pythagorean theorem - integers

- |          |          |          |          |
|----------|----------|----------|----------|
| 1) 3     | 2) 13.9  | 3) 5.7   | 4) 23    |
| 5) 18.4  | 6) 20.6  | 7) 20.6  | 8) 14.9  |
| 9) 16.4  | 10) 9.7  | 11) 9.8  | 12) 17.2 |
| 13) 21.5 | 14) 24.2 | 15) 13   | 16) 21.9 |
| 17) 19.4 | 18) 9.9  | 19) 5    | 20) 13.9 |
| 21) 3.5  | 22) 3.9  | 23) 20.8 | 24) 5.3  |
| 25) 7.5  | 26) 13.2 | 27) 12   | 28) 8.3  |
| 29) 6.7  | 30) 16.1 |          |          |