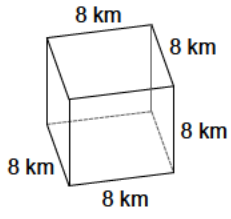


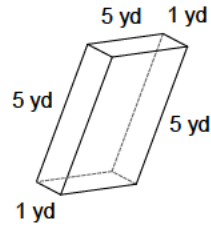
# Solid figures - prism

Calculate the surface area of each given prism.

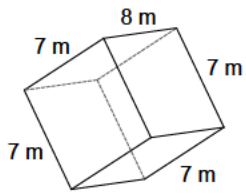
1)



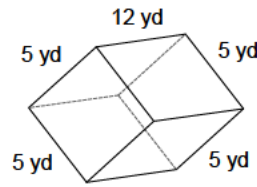
2)



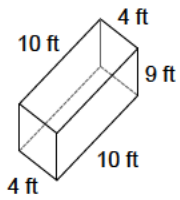
3)



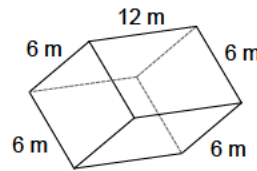
4)



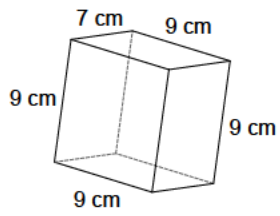
5)



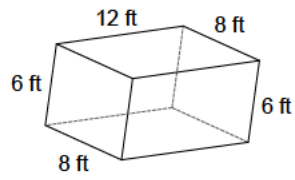
6)



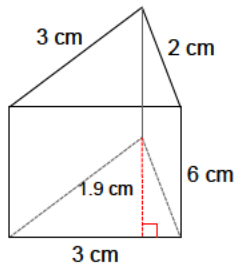
7)



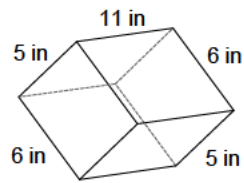
8)



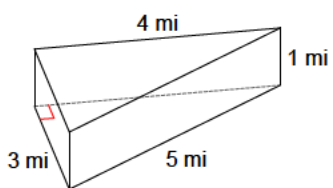
9)



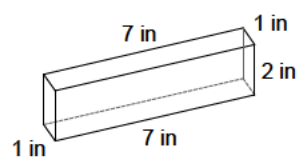
10)



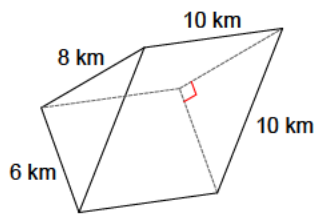
11)



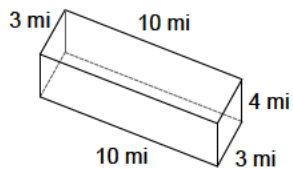
12)



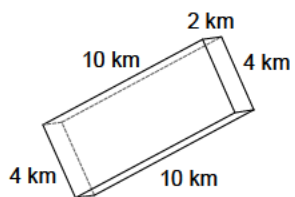
13)



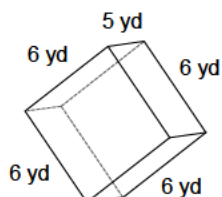
14)



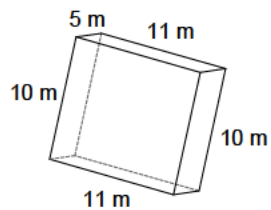
15)



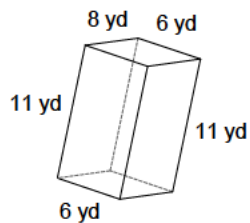
16)



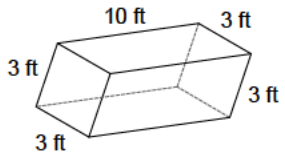
17)



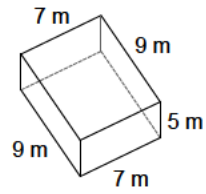
18)



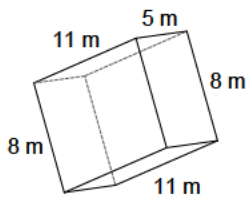
19)



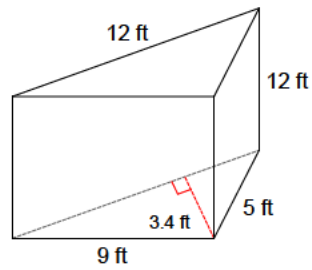
20)



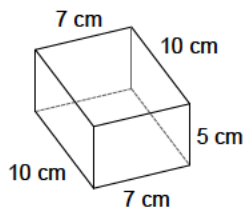
21)



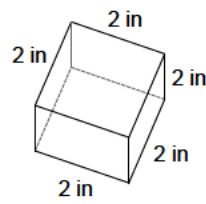
22)



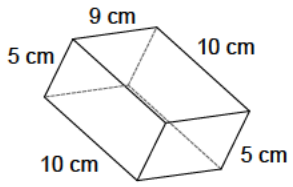
23)



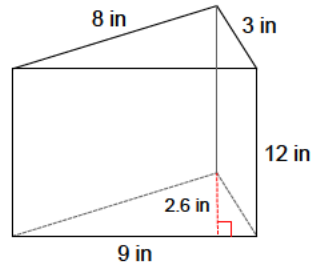
24)



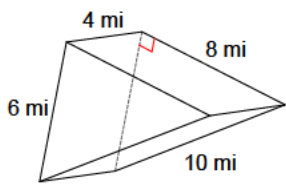
25)



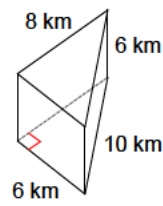
26)



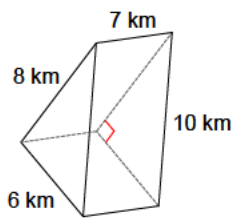
27)



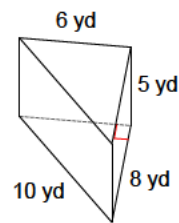
28)



29)



30)



## Answers to Solid figures - prism

- |                         |                           |                         |                           |
|-------------------------|---------------------------|-------------------------|---------------------------|
| 1) 384 km <sup>2</sup>  | 2) 70 yd <sup>2</sup>     | 3) 322 m <sup>2</sup>   | 4) 290 yd <sup>2</sup>    |
| 5) 332 ft <sup>2</sup>  | 6) 360 m <sup>2</sup>     | 7) 414 cm <sup>2</sup>  | 8) 432 ft <sup>2</sup>    |
| 9) 53.7 cm <sup>2</sup> | 10) 302 in <sup>2</sup>   | 11) 24 mi <sup>2</sup>  | 12) 46 in <sup>2</sup>    |
| 13) 288 km <sup>2</sup> | 14) 164 mi <sup>2</sup>   | 15) 136 km <sup>2</sup> | 16) 192 yd <sup>2</sup>   |
| 17) 430 m <sup>2</sup>  | 18) 404 yd <sup>2</sup>   | 19) 138 ft <sup>2</sup> | 20) 286 m <sup>2</sup>    |
| 21) 366 m <sup>2</sup>  | 22) 352.8 ft <sup>2</sup> | 23) 310 cm <sup>2</sup> | 24) 24 in <sup>2</sup>    |
| 25) 370 cm <sup>2</sup> | 26) 263.4 in <sup>2</sup> | 27) 144 mi <sup>2</sup> | 28) 192.8 km <sup>2</sup> |
| 29) 216 km <sup>2</sup> | 30) 168 yd <sup>2</sup>   |                         |                           |