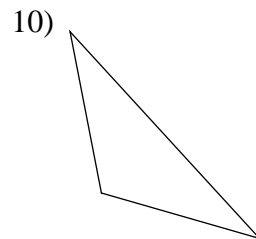
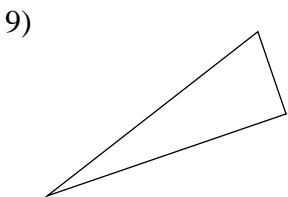
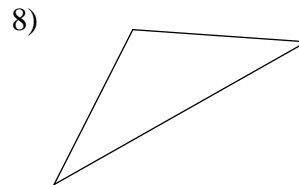
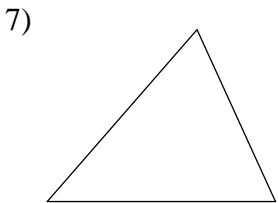
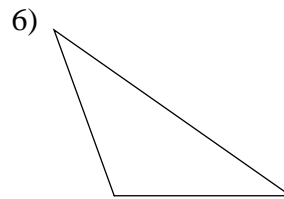
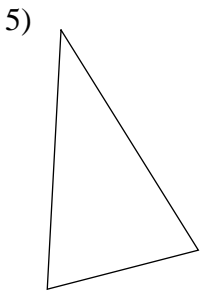
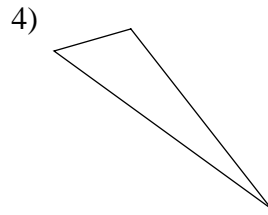
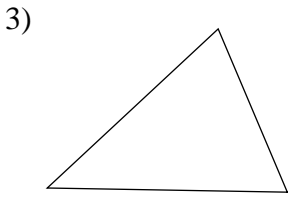
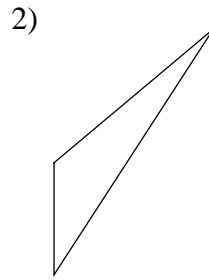
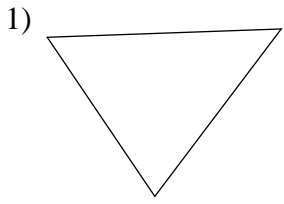
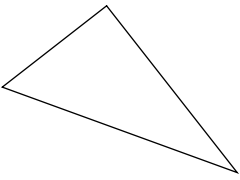


Triangles - classification - sides

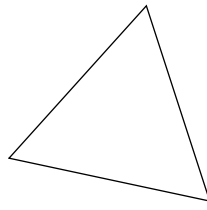
Recognize and classify each triangle by its sides.



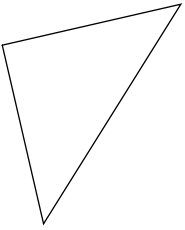
11)



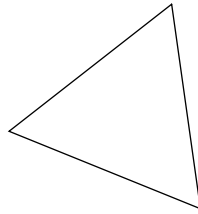
12)



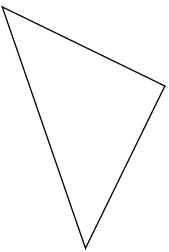
13)



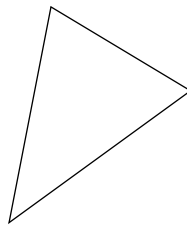
14)



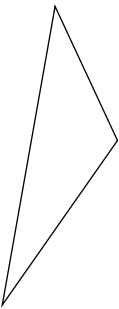
15)



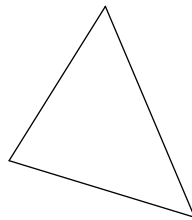
16)



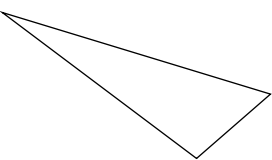
17)



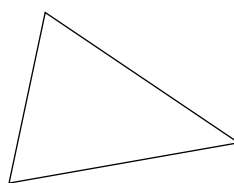
18)

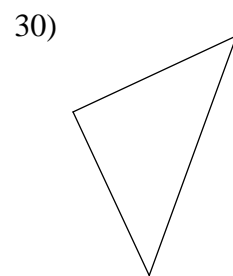
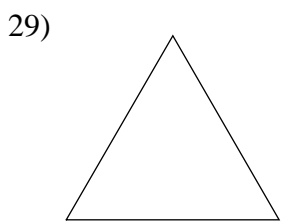
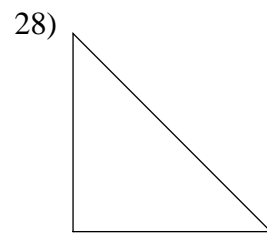
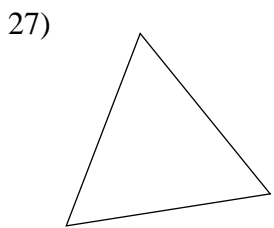
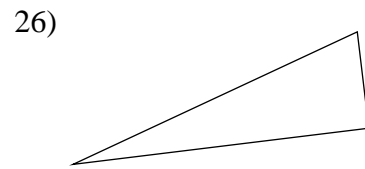
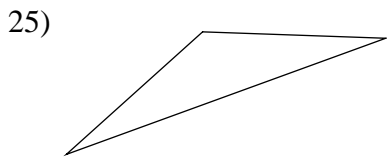
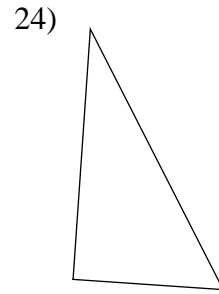
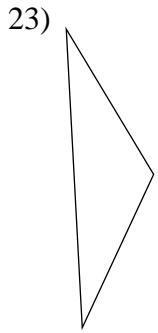
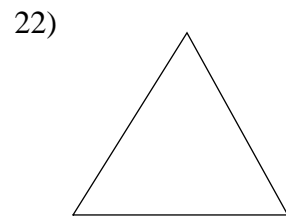
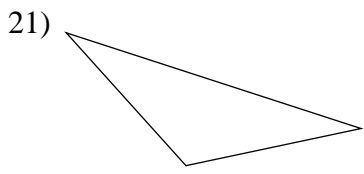


19)



20)





Answers to Triangles - classification - sides

- | | | | |
|-----------------|-----------------|-----------------|-----------------|
| 1) scalene | 2) scalene | 3) scalene | 4) scalene |
| 5) isosceles | 6) isosceles | 7) isosceles | 8) isosceles |
| 9) scalene | 10) isosceles | 11) scalene | 12) equilateral |
| 13) isosceles | 14) equilateral | 15) isosceles | 16) scalene |
| 17) scalene | 18) scalene | 19) scalene | 20) isosceles |
| 21) isosceles | 22) isosceles | 23) isosceles | 24) scalene |
| 25) isosceles | 26) scalene | 27) equilateral | 28) isosceles |
| 29) equilateral | 30) isosceles | | |