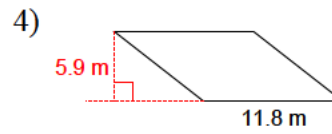
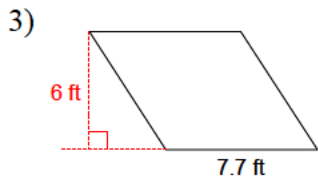
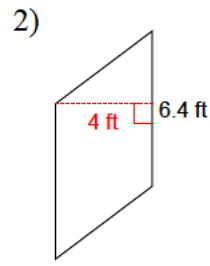
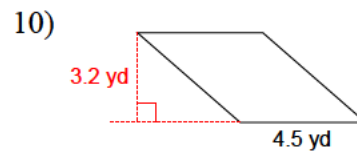
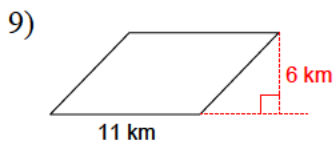
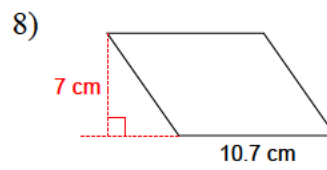

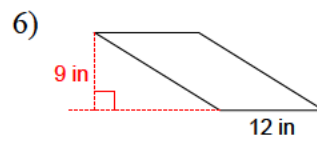
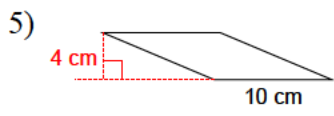


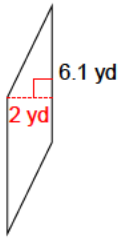
# Quadrilaterals - area - parallelograms

Calculate the area of each given parallelogram.

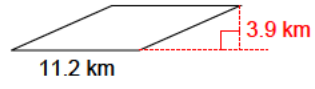




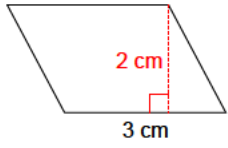
11)



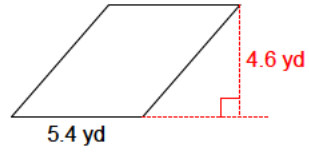
12)



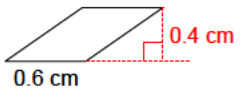
13)



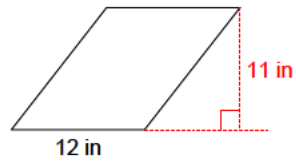
14)



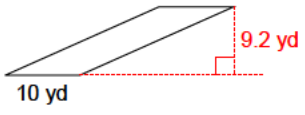
15)



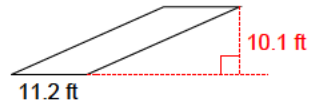
16)



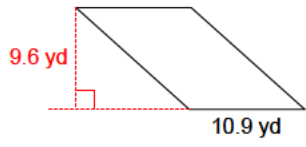
17)



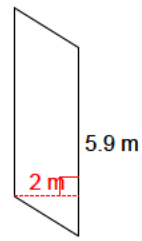
18)



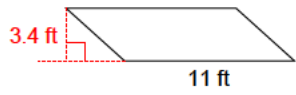
19)



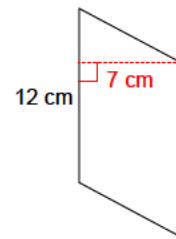
20)



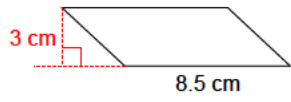
21)



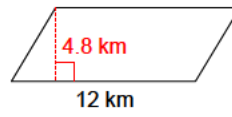
22)



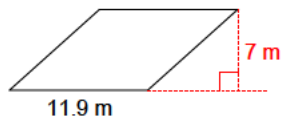
23)



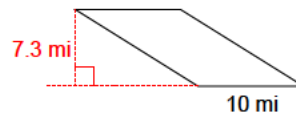
24)



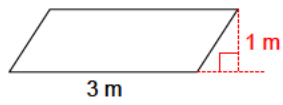
25)



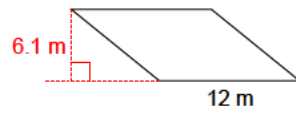
26)



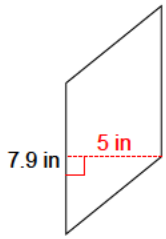
27)



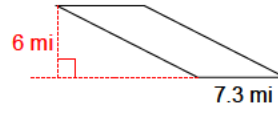
28)



29)



30)



## Answers to Quadrilaterals - area - parallelograms

- |                          |                            |                            |                           |
|--------------------------|----------------------------|----------------------------|---------------------------|
| 1) 44.4 yd <sup>2</sup>  | 2) 25.6 ft <sup>2</sup>    | 3) 46.2 ft <sup>2</sup>    | 4) 69.62 m <sup>2</sup>   |
| 5) 40 cm <sup>2</sup>    | 6) 108 in <sup>2</sup>     | 7) 39.6 km <sup>2</sup>    | 8) 74.9 cm <sup>2</sup>   |
| 9) 66 km <sup>2</sup>    | 10) 14.4 yd <sup>2</sup>   | 11) 12.2 yd <sup>2</sup>   | 12) 43.68 km <sup>2</sup> |
| 13) 6 cm <sup>2</sup>    | 14) 24.84 yd <sup>2</sup>  | 15) 0.24 cm <sup>2</sup>   | 16) 132 in <sup>2</sup>   |
| 17) 92 yd <sup>2</sup>   | 18) 113.12 ft <sup>2</sup> | 19) 104.64 yd <sup>2</sup> | 20) 11.8 m <sup>2</sup>   |
| 21) 37.4 ft <sup>2</sup> | 22) 84 cm <sup>2</sup>     | 23) 25.5 cm <sup>2</sup>   | 24) 57.6 km <sup>2</sup>  |
| 25) 83.3 m <sup>2</sup>  | 26) 73 mi <sup>2</sup>     | 27) 3 m <sup>2</sup>       | 28) 73.2 m <sup>2</sup>   |
| 29) 39.5 in <sup>2</sup> | 30) 43.8 mi <sup>2</sup>   |                            |                           |