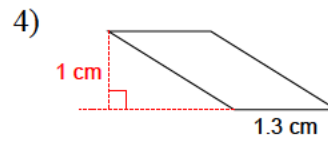
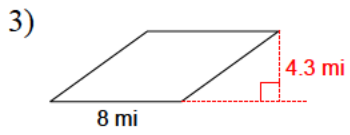
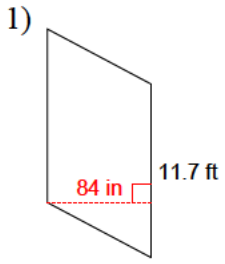
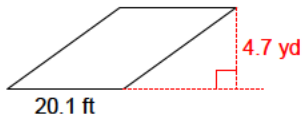


Quadrilaterals - area - parallelograms

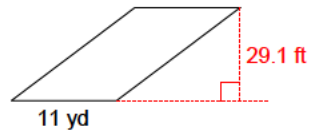
Find the area of each parallelogram by using the information at hand.



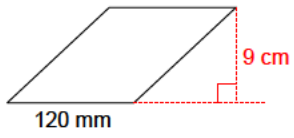
5)



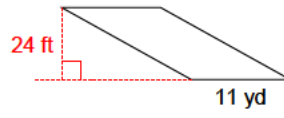
6)



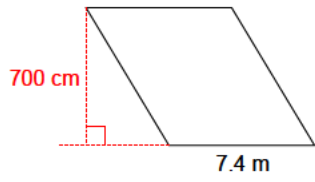
7)



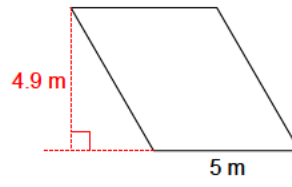
8)



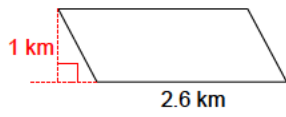
9)



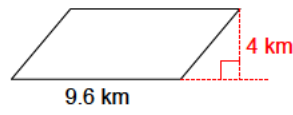
10)



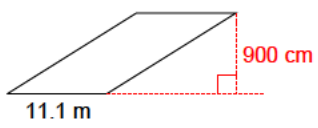
11)



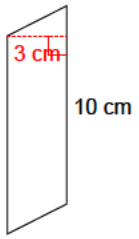
12)



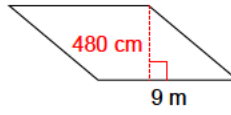
13)



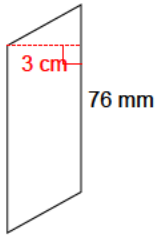
14)



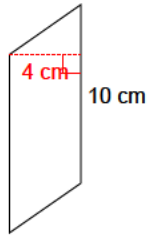
15)



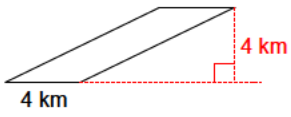
16)



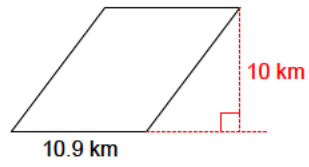
17)



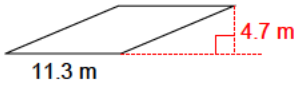
18)



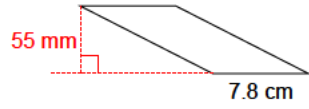
19)



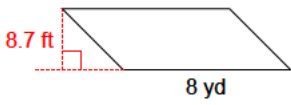
20)



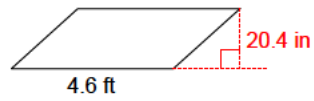
21)



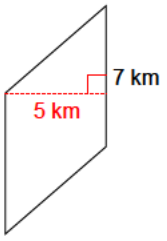
22)



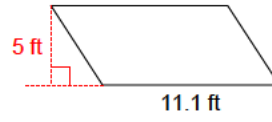
23)



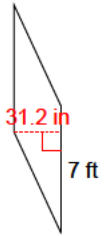
24)



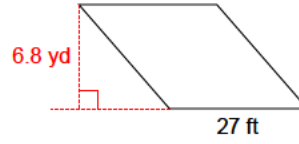
25)



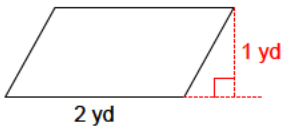
26)



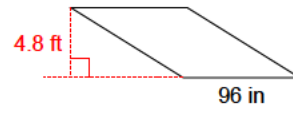
27)



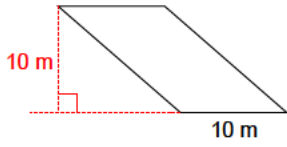
28)



29)



30)



Answers to Quadrilaterals - area - parallelograms

- | | | | |
|--------------------------|--------------------------|--------------------------|--------------------------|
| 1) 81.9 ft ² | 2) 10.56 mi ² | 3) 34.4 mi ² | 4) 1.3 cm ² |
| 5) 31.49 yd ² | 6) 106.7 yd ² | 7) 108 cm ² | 8) 88 yd ² |
| 9) 51.8 m ² | 10) 24.5 m ² | 11) 2.6 km ² | 12) 38.4 km ² |
| 13) 99.9 m ² | 14) 30 cm ² | 15) 43.2 m ² | 16) 22.8 cm ² |
| 17) 40 cm ² | 18) 16 km ² | 19) 109 km ² | 20) 53.11 m ² |
| 21) 42.9 cm ² | 22) 23.2 yd ² | 23) 7.82 ft ² | 24) 35 km ² |
| 25) 55.5 ft ² | 26) 18.2 ft ² | 27) 61.2 yd ² | 28) 2 yd ² |
| 29) 38.4 ft ² | 30) 100 m ² | | |