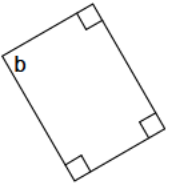


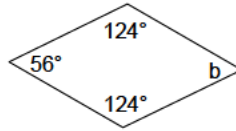
Quadrilaterals - angles

Calculate the measure of angle b for each given quadrilateral.

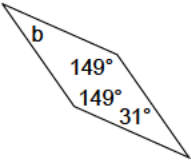
1)



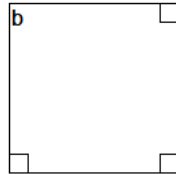
2)



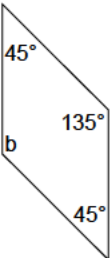
3)



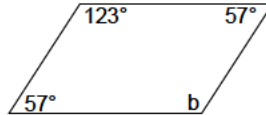
4)




5)



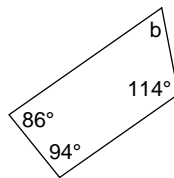
6)



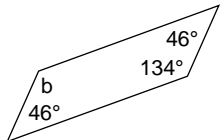
7)



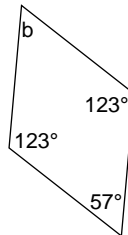
8)



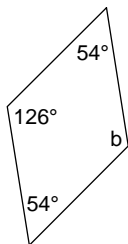
9)



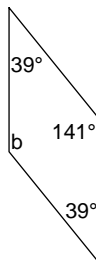
10)



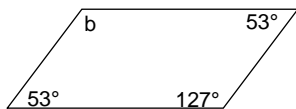
11)



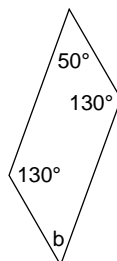
12)



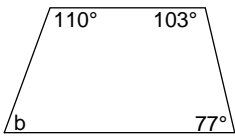
13)



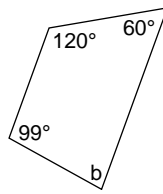
14)



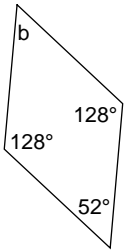
15)



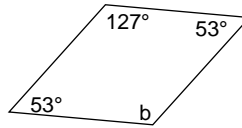
16)



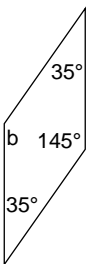
17)



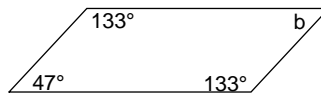
18)



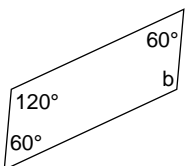
19)



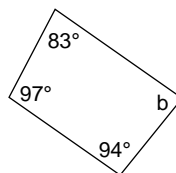
20)



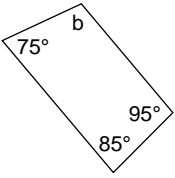
21)



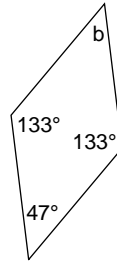
22)



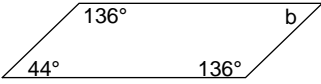
23)



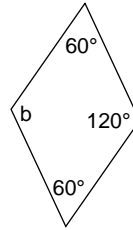
24)



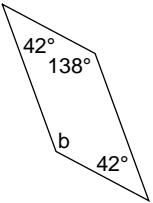
25)



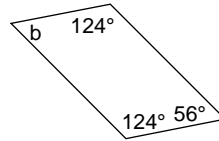
26)



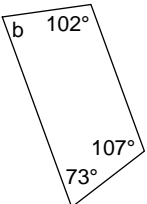
27)



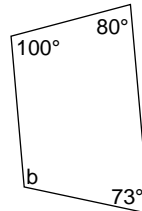
28)



29)



30)



Answers to Quadrilaterals - angles

1) 90°

5) 135°

9) 134°

13) 127°

17) 52°

21) 120°

25) 44°

29) 78°

2) 56°

6) 123°

10) 57°

14) 50°

18) 127°

22) 86°

26) 120°

30) 107°

3) 31°

7) 95°

11) 126°

15) 70°

19) 145°

23) 105°

27) 138°

4) 90°

8) 66°

12) 141°

16) 81°

20) 47°

24) 47°

28) 56°