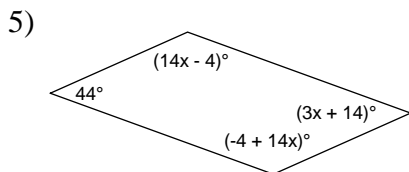
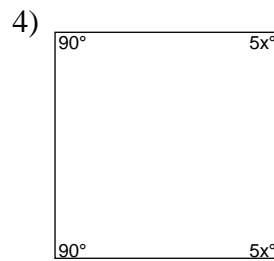
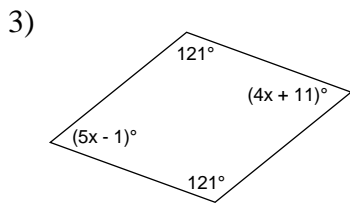
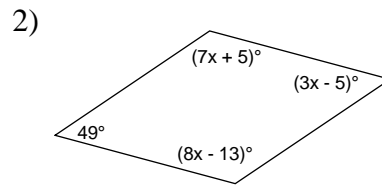
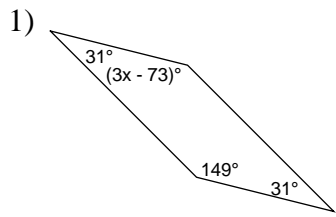
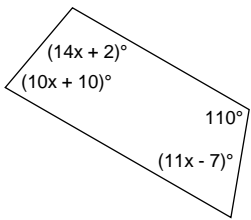


# Quadrilaterals - equations

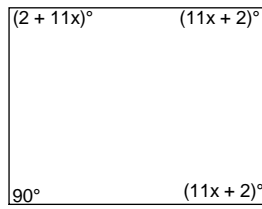
Calculate the value of x.



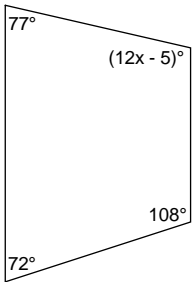
6)



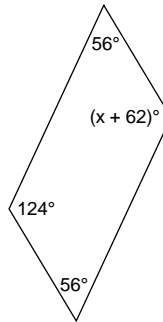
7)



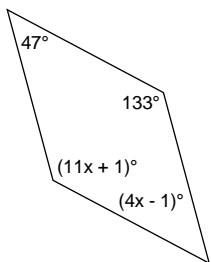
8)



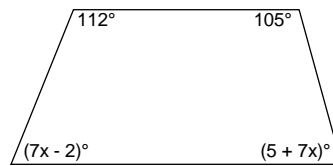
9)



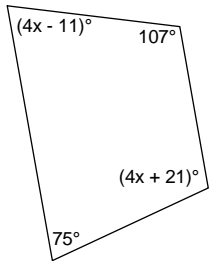
10)



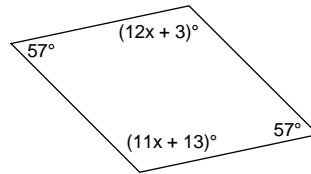
11)



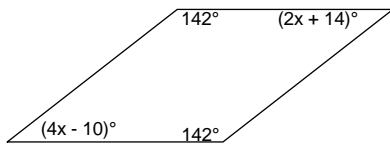
12)



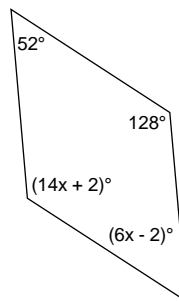
13)



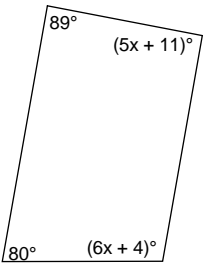
14)



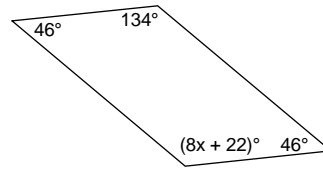
15)



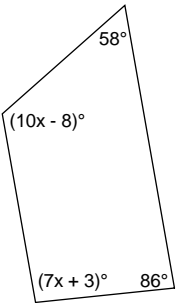
16)



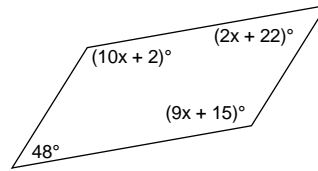
17)



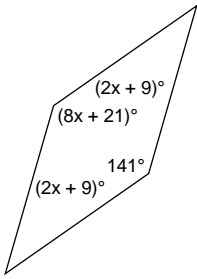
18)



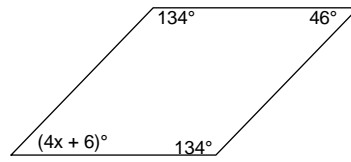
19)




20)



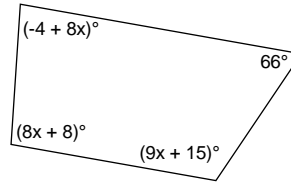
21)



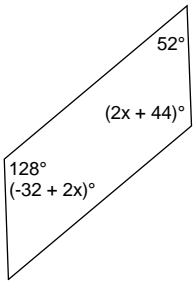
22)



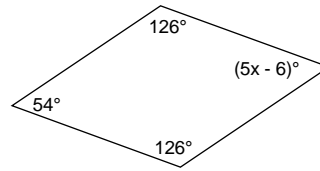
23)



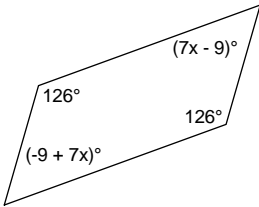
24)



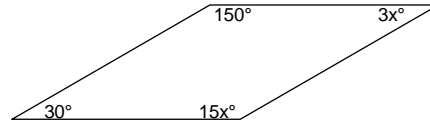
25)



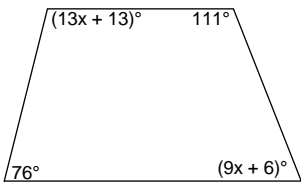
26)



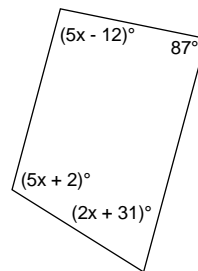
27)



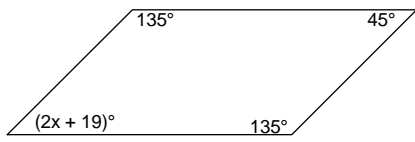
28)



29)



30)



## Answers to Quadrilaterals - equations

1) 74  
5) 10  
9) 62  
13) 10  
17) 14  
21) 10  
25) 12  
29) 21

2) 18  
6) 7  
10) 12  
14) 12  
18) 13  
22) 9  
26) 9  
30) 13

3) 12  
7) 8  
11) 10  
15) 9  
19) 13  
23) 11  
27) 10

4) 18  
8) 9  
12) 21  
16) 16  
20) 15  
24) 42  
28) 7