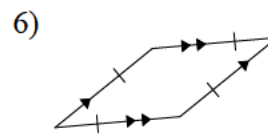
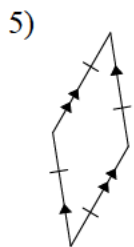
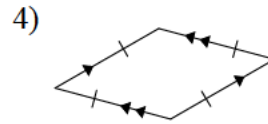
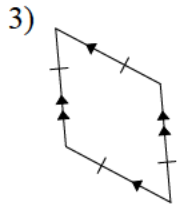
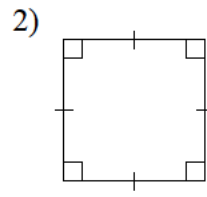
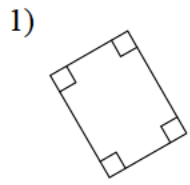
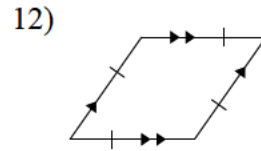
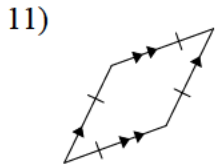
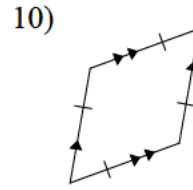
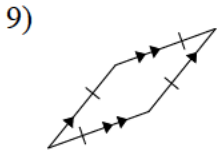
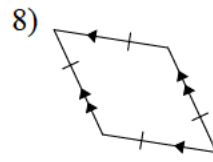
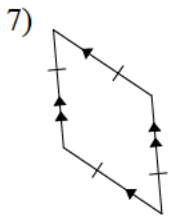


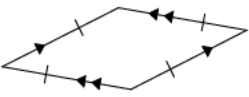
Quadrilaterals

Identify each of the quadrilaterals.

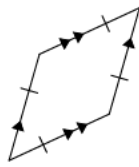




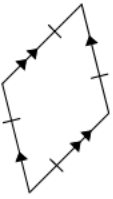
13)



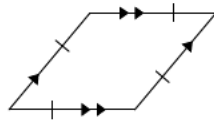
14)



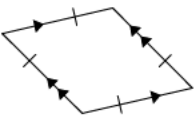
15)



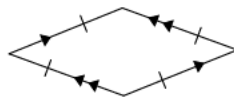
16)



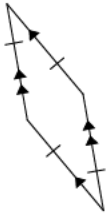
17)



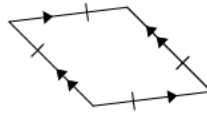
18)



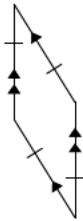
19)



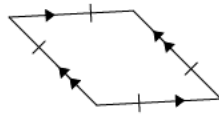
20)



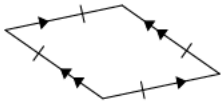
21)



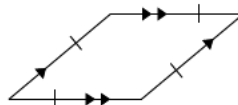
22)

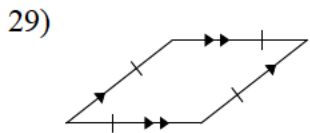
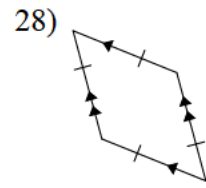
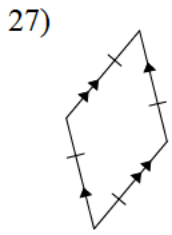
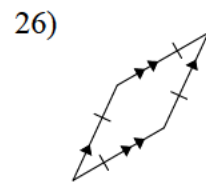
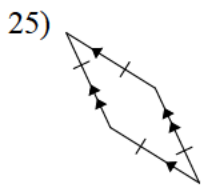


23)



24)





Answers to Quadrilaterals

- | | | | |
|--------------|-------------|-------------|-------------|
| 1) Rectangle | 2) Square | 3) Rhombus | 4) Rhombus |
| 5) Rhombus | 6) Rhombus | 7) Rhombus | 8) Rhombus |
| 9) Rhombus | 10) Rhombus | 11) Rhombus | 12) Rhombus |
| 13) Rhombus | 14) Rhombus | 15) Rhombus | 16) Rhombus |
| 17) Rhombus | 18) Rhombus | 19) Rhombus | 20) Rhombus |
| 21) Rhombus | 22) Rhombus | 23) Rhombus | 24) Rhombus |
| 25) Rhombus | 26) Rhombus | 27) Rhombus | 28) Rhombus |
| 29) Rhombus | 30) Rhombus | | |