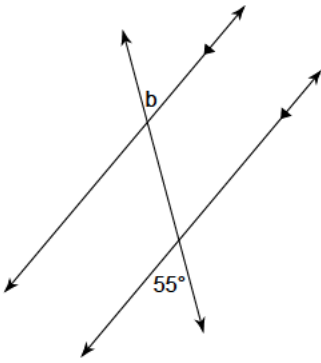
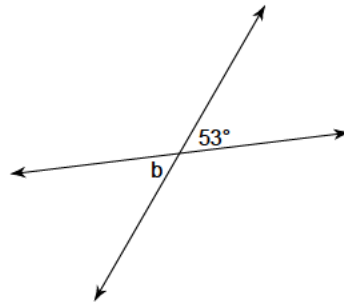


Use the information from the drawing to find the measure of angle b.

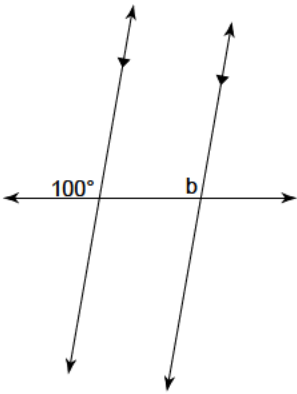
1)



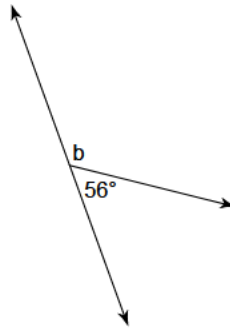
2)



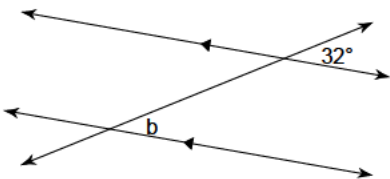
3)



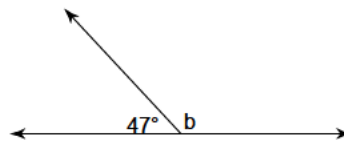
4)



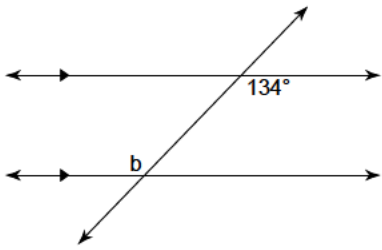
5)



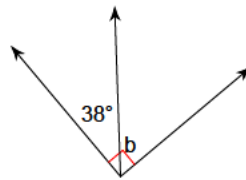
6)



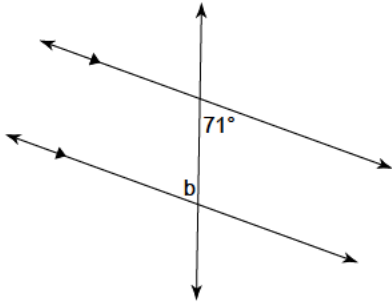
7)



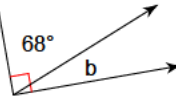
8)



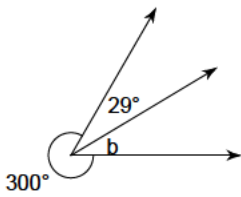
9)



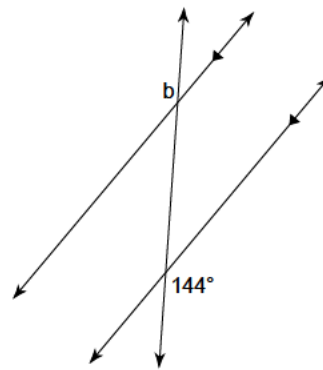
10)



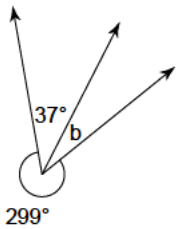
11)



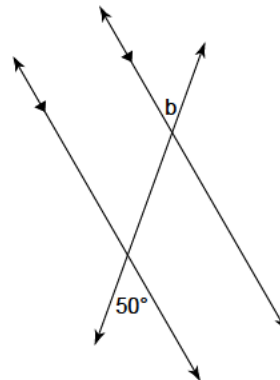
12)

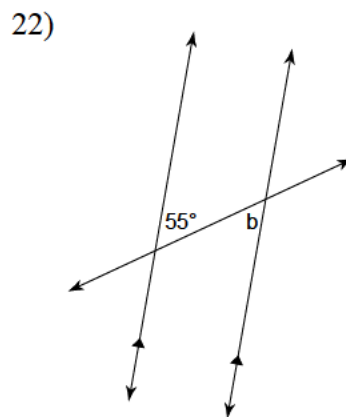
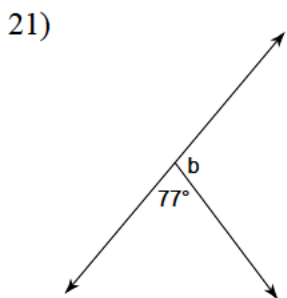
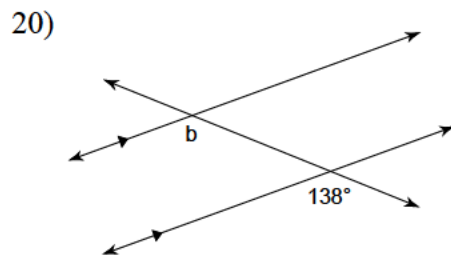
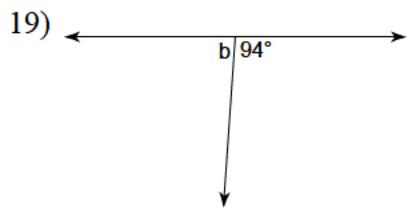
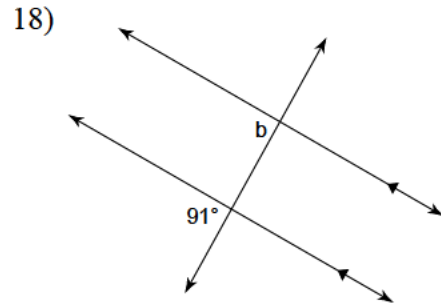
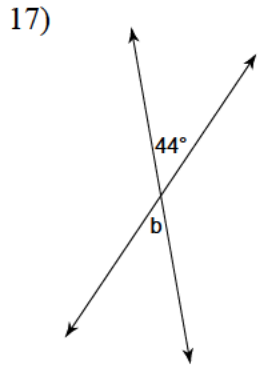
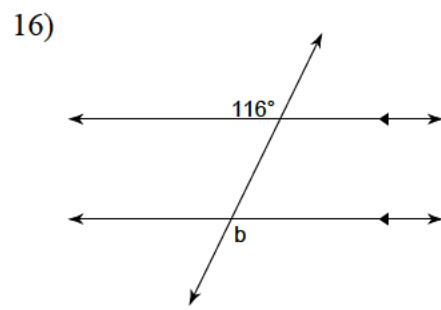
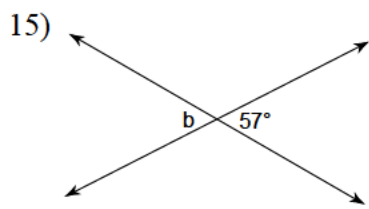


13)

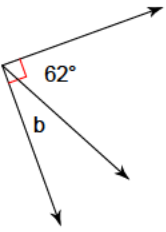


14)

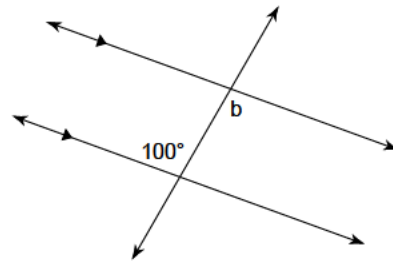




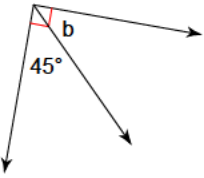
23)



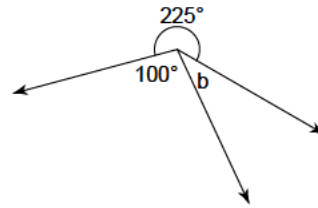
24)



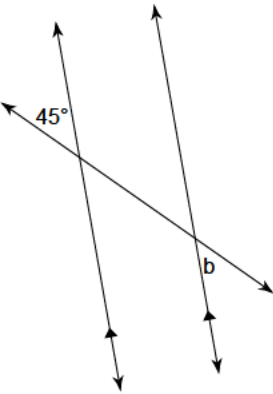
25)



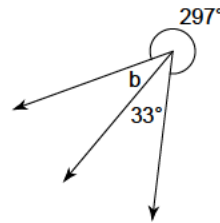
26)



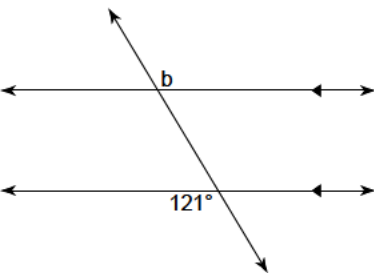
27)



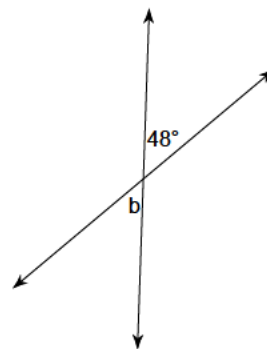
28)



29)



30)



- 1)  $55^\circ$
- 5)  $32^\circ$
- 9)  $71^\circ$
- 13)  $24^\circ$
- 17)  $44^\circ$
- 21)  $103^\circ$
- 25)  $45^\circ$
- 29)  $121^\circ$

- 2)  $53^\circ$
- 6)  $133^\circ$
- 10)  $22^\circ$
- 14)  $50^\circ$
- 18)  $91^\circ$
- 22)  $55^\circ$
- 26)  $35^\circ$
- 30)  $48^\circ$

- 3)  $100^\circ$
- 7)  $134^\circ$
- 11)  $31^\circ$
- 15)  $57^\circ$
- 19)  $86^\circ$
- 23)  $28^\circ$
- 27)  $45^\circ$

- 4)  $124^\circ$
- 8)  $52^\circ$
- 12)  $144^\circ$
- 16)  $116^\circ$
- 20)  $138^\circ$
- 24)  $100^\circ$
- 28)  $30^\circ$