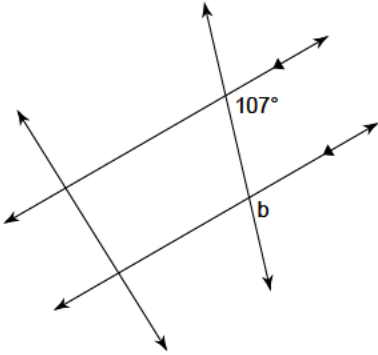
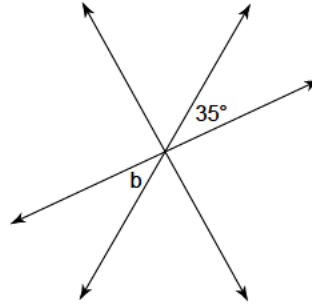


Determine the measure of angle b.

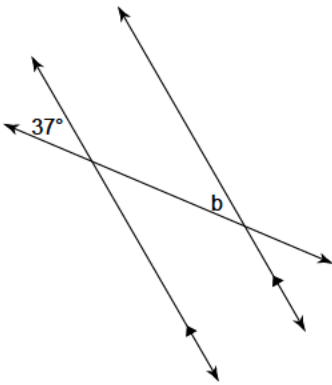
1)



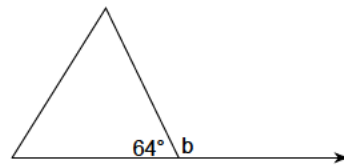
2)



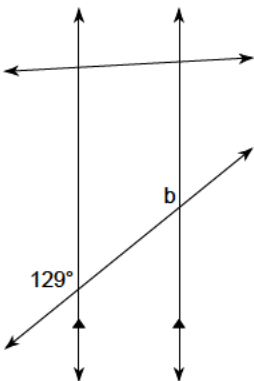
3)



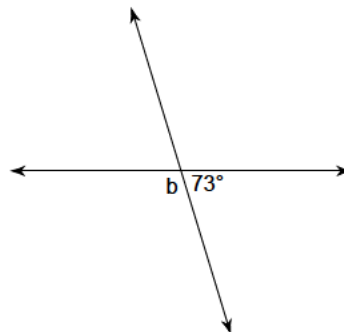
4)



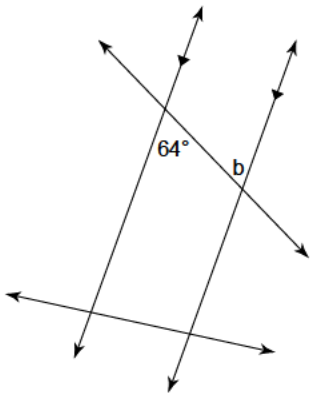
5)



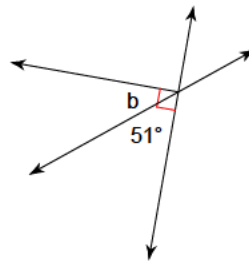
6)



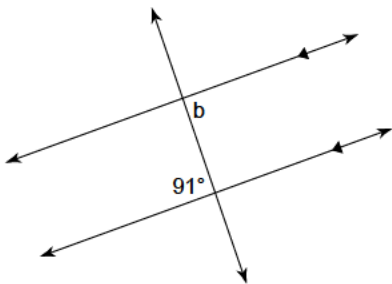
7)



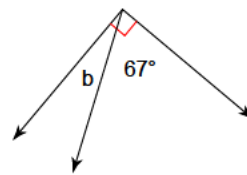
8)



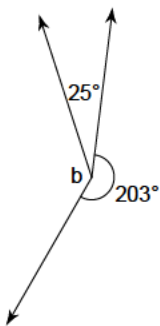
9)



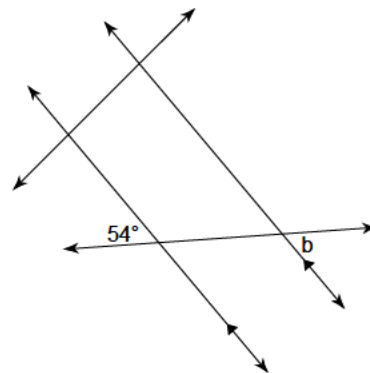
10)



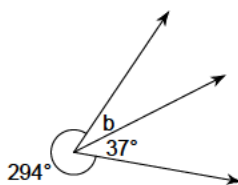
11)



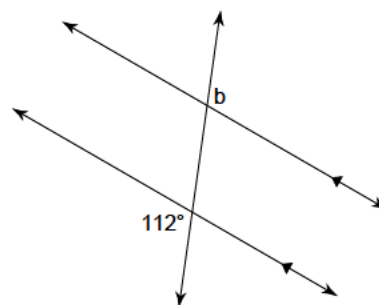
12)



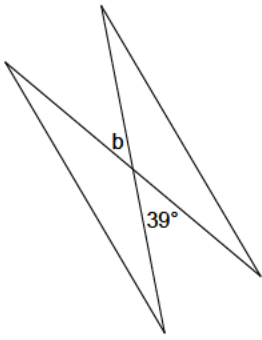
13)



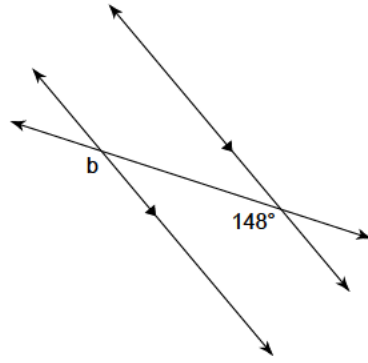
14)



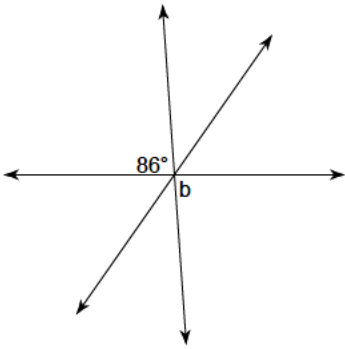
15)



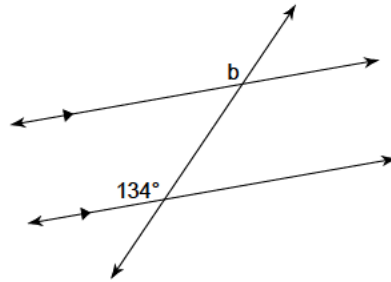
16)



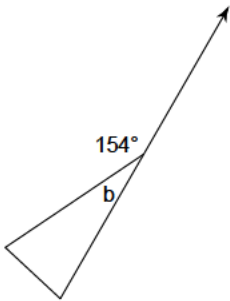
17)



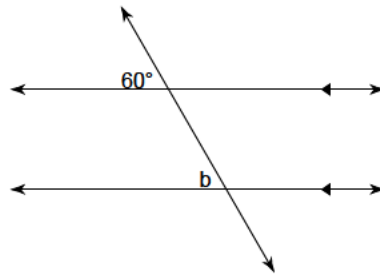
18)



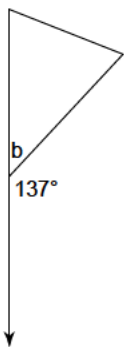
19)



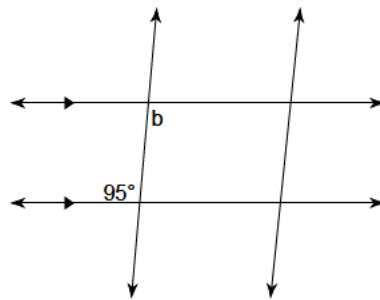
20)



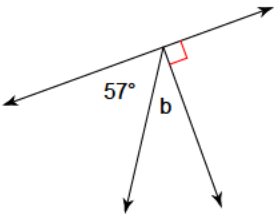
21)



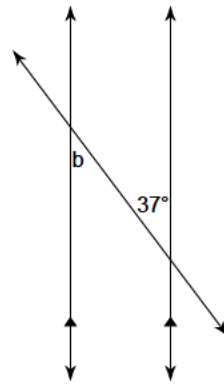
22)



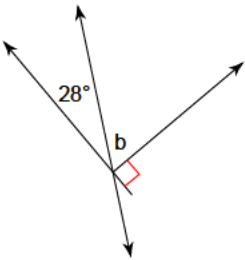
23)



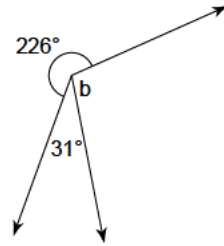
24)



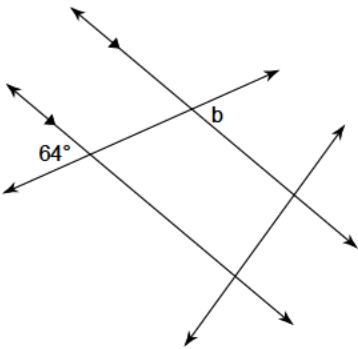
25)



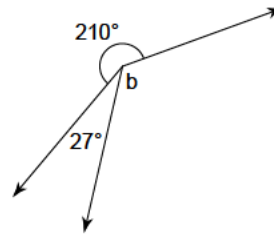
26)



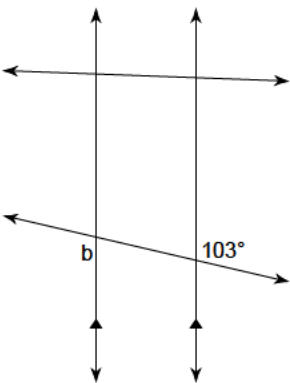
27)



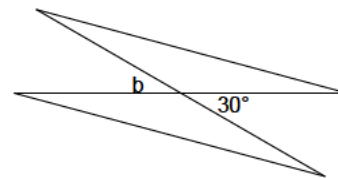
28)



29)



30)



- 1)  $107^\circ$
- 5)  $129^\circ$
- 9)  $91^\circ$
- 13)  $29^\circ$
- 17)  $86^\circ$
- 21)  $43^\circ$
- 25)  $62^\circ$
- 29)  $103^\circ$

- 2)  $35^\circ$
- 6)  $107^\circ$
- 10)  $23^\circ$
- 14)  $112^\circ$
- 18)  $134^\circ$
- 22)  $95^\circ$
- 26)  $103^\circ$
- 30)  $30^\circ$

- 3)  $37^\circ$
- 7)  $64^\circ$
- 11)  $132^\circ$
- 15)  $39^\circ$
- 19)  $26^\circ$
- 23)  $33^\circ$
- 27)  $64^\circ$

- 4)  $116^\circ$
- 8)  $39^\circ$
- 12)  $54^\circ$
- 16)  $148^\circ$
- 20)  $60^\circ$
- 24)  $37^\circ$
- 28)  $123^\circ$