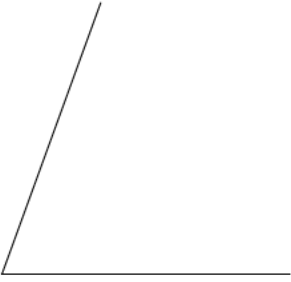
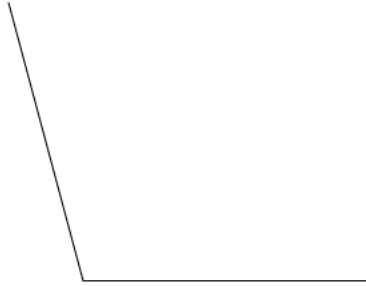


Find the measure of each angle to the nearest degree.

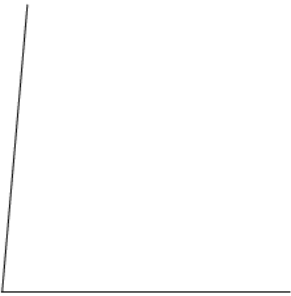
1)



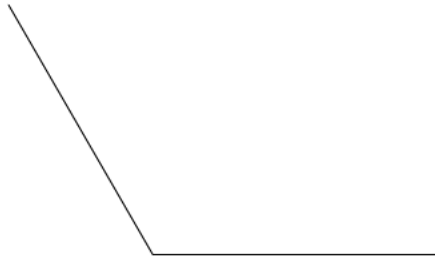
2)



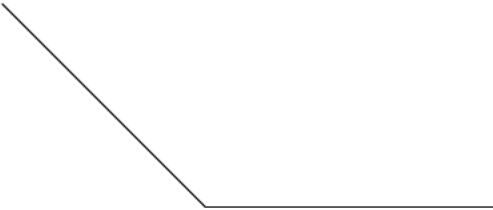
3)



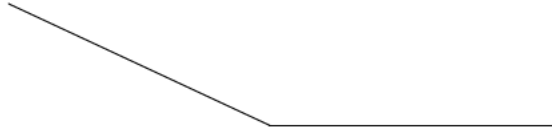
4)



5)



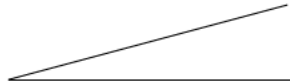
6)



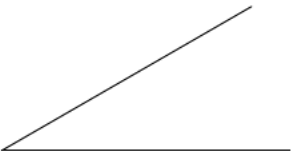
7)




8)



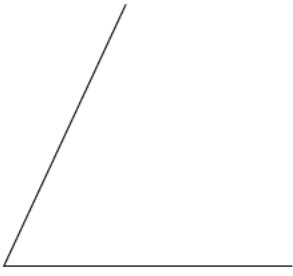
9)



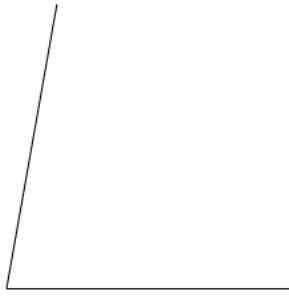
10)



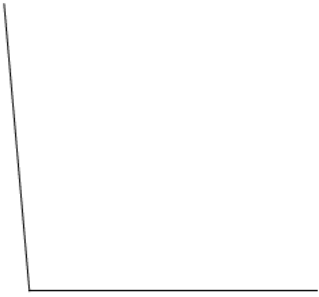
11)



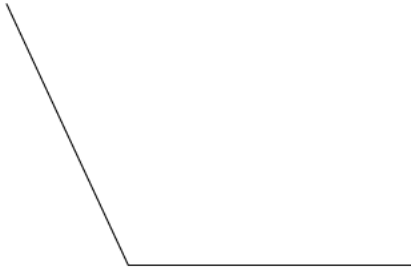
12)



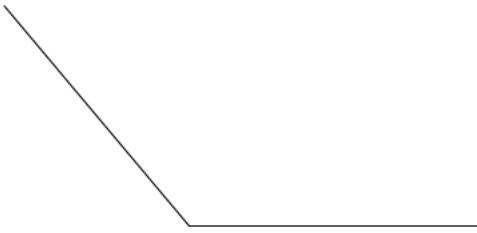
13)



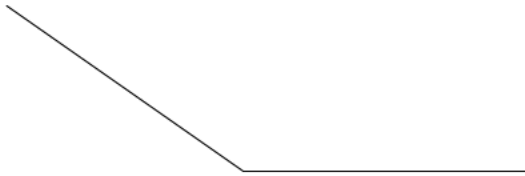
14)



15)



16)



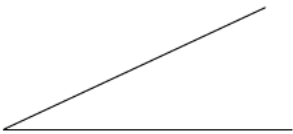
17)



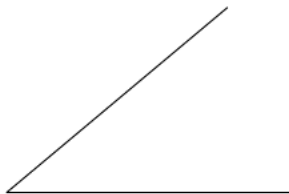
18)



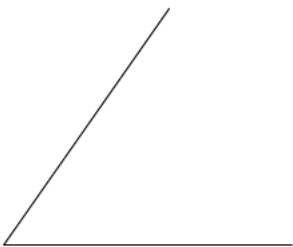
19)



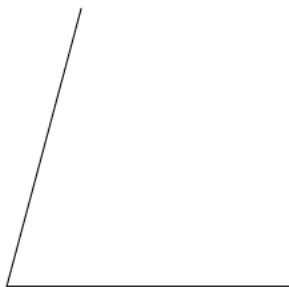
20)




21)



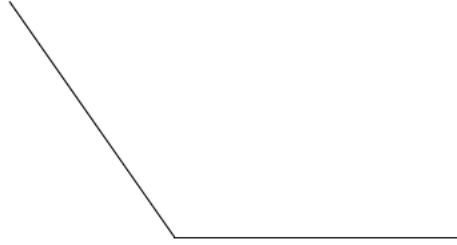
22)



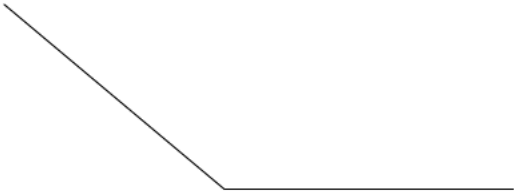
23)



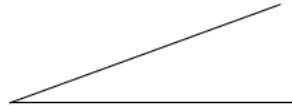
24)



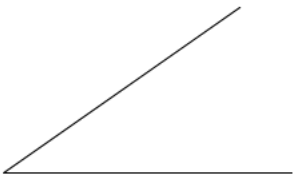
25)



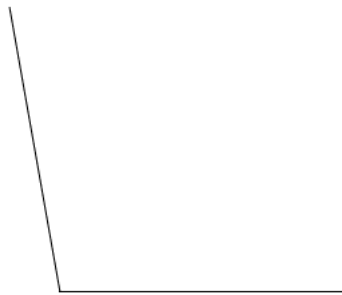
26)



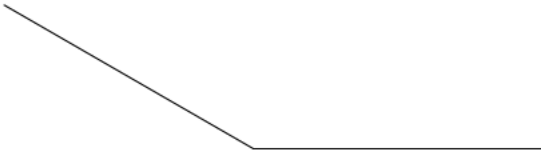
27)



28)



29)



30)



- 1) 70°
- 5) 135°
- 9) 30°
- 13) 95°
- 17) 160°
- 21) 55°
- 25) 140°
- 29) 150°

- 2) 105°
- 6) 155°
- 10) 50°
- 14) 115°
- 18) 180°
- 22) 75°
- 26) 20°
- 30) 165°

- 3) 85°
- 7) 170°
- 11) 65°
- 15) 130°
- 19) 25°
- 23) 90°
- 27) 35°

- 4) 120°
- 8) 15°
- 12) 80°
- 16) 145°
- 20) 40°
- 24) 125°
- 28) 100°