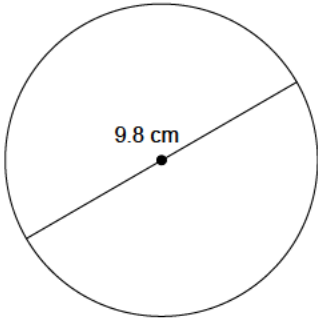
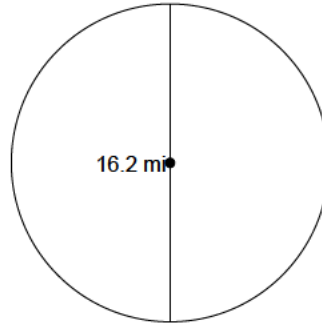


Calculate the area of each circle to the nearest tenth of a degree.

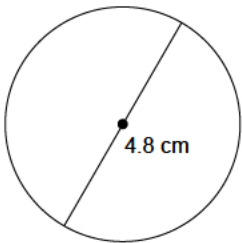
1)



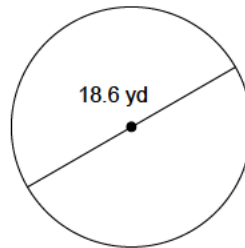
2)



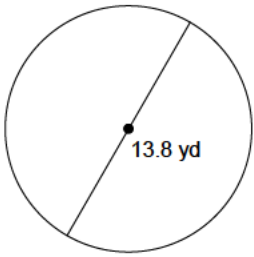
3)



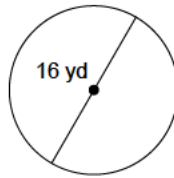
4)



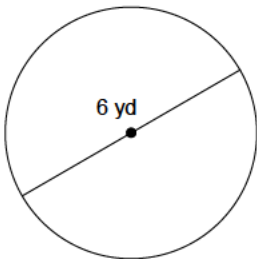
5)



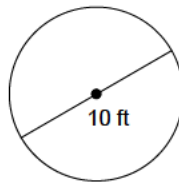
6)



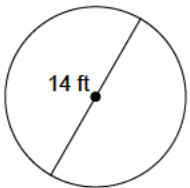
7)



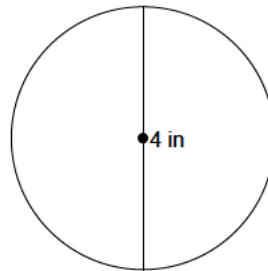
8)



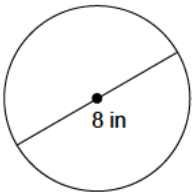
9)



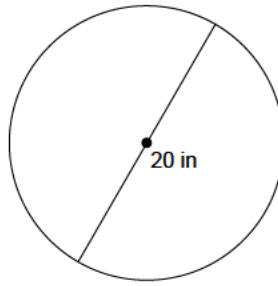
10)



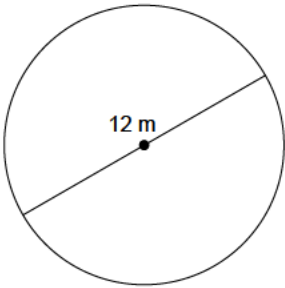
11)



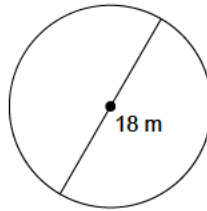
12)



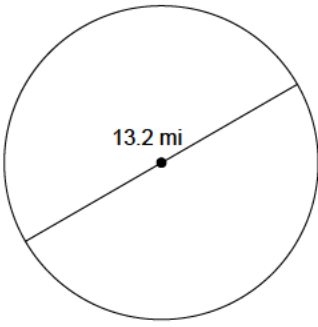
13)



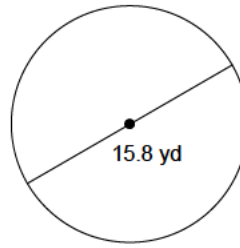
14)



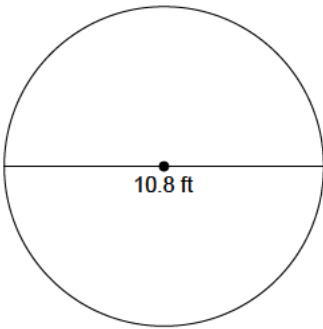
15)



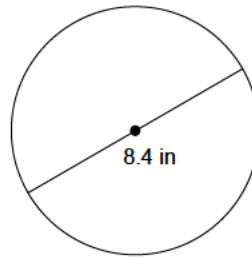
16)



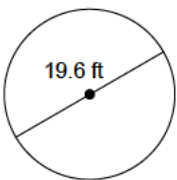
17)



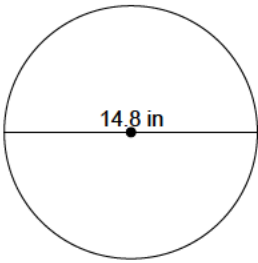
18)



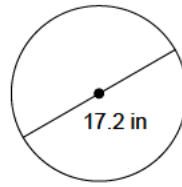
19)



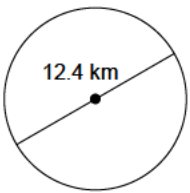
20)



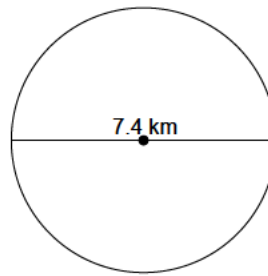
21)



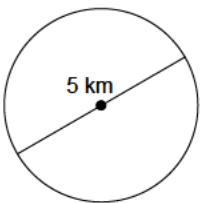
22)



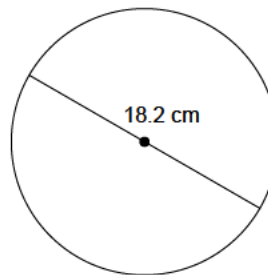
23)



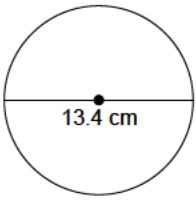
24)



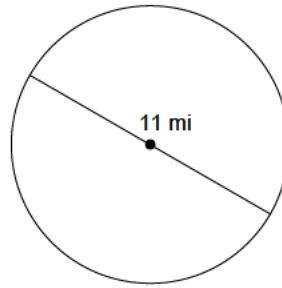
25)



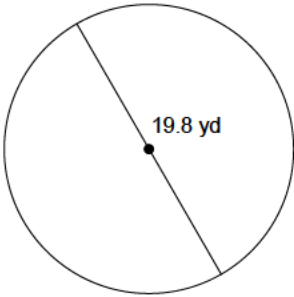
26)



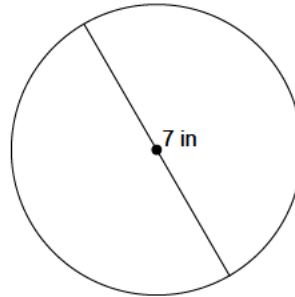
27)



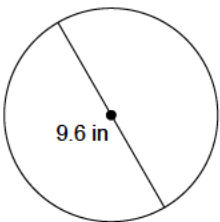
28)



29)



30)



- | | | | |
|---------------------------|---------------------------|---------------------------|---------------------------|
| 1) 75.4 cm ² | 2) 206.1 mi ² | 3) 18.1 cm ² | 4) 271.7 yd ² |
| 5) 149.6 yd ² | 6) 201.1 yd ² | 7) 28.3 yd ² | 8) 78.5 ft ² |
| 9) 153.9 ft ² | 10) 12.6 in ² | 11) 50.3 in ² | 12) 314.2 in ² |
| 13) 113.1 m ² | 14) 254.5 m ² | 15) 136.8 mi ² | 16) 196.1 yd ² |
| 17) 91.6 ft ² | 18) 55.4 in ² | 19) 301.7 ft ² | 20) 172 in ² |
| 21) 232.4 in ² | 22) 120.8 km ² | 23) 43 km ² | 24) 19.6 km ² |
| 25) 260.2 cm ² | 26) 141 cm ² | 27) 95 mi ² | 28) 307.9 yd ² |
| 29) 38.5 in ² | 30) 72.4 in ² | | |