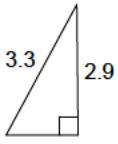


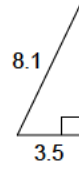
Pythagorean theorem - decimals

Find the length of the missing leg. Round it to the nearest tenth.

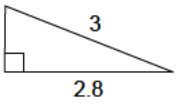
1)



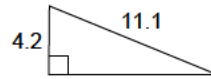
2)



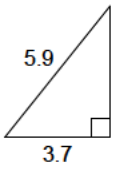
3)



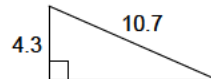
4)



5)



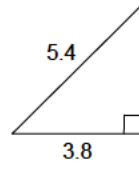
6)



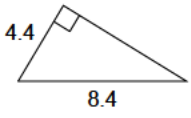
7)



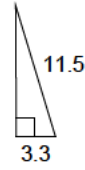
8)



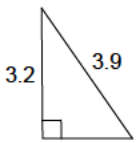
9)



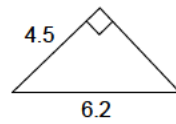
10)



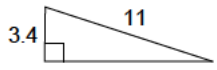
11)



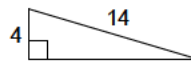
12)



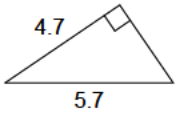
13)



14)



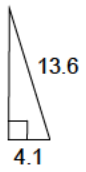
15)



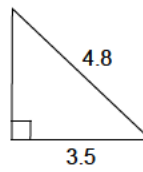
16)



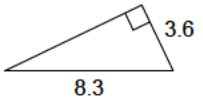
17)



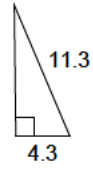
18)



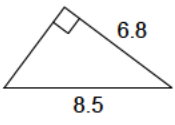
19)



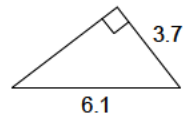
20)



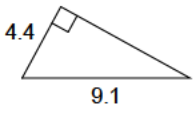
21)



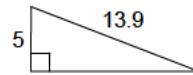
22)



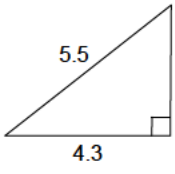
23)



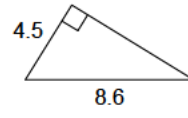
24)



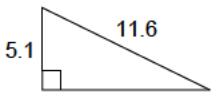
25)



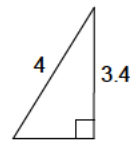
26)



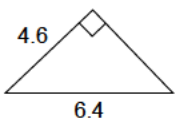
27)



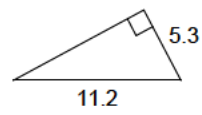
28)



29)



30)



Answers to Pythagorean theorem - decimals

- | | | | |
|----------|----------|----------|----------|
| 1) 1.6 | 2) 7.3 | 3) 1.1 | 4) 10.3 |
| 5) 4.6 | 6) 9.8 | 7) 8.1 | 8) 3.8 |
| 9) 7.2 | 10) 11 | 11) 2.2 | 12) 4.3 |
| 13) 10.5 | 14) 13.4 | 15) 3.2 | 16) 8.1 |
| 17) 13 | 18) 3.3 | 19) 7.5 | 20) 10.4 |
| 21) 5.1 | 22) 4.8 | 23) 8 | 24) 13 |
| 25) 3.4 | 26) 7.3 | 27) 10.4 | 28) 2.1 |
| 29) 4.4 | 30) 9.9 | | |