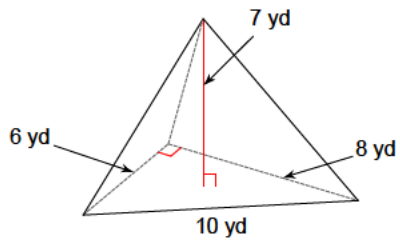


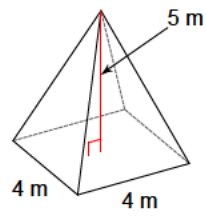
Solid figures - pyramids

Calculate the volume of each given pyramid.

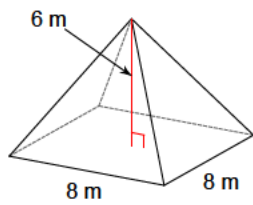
1)



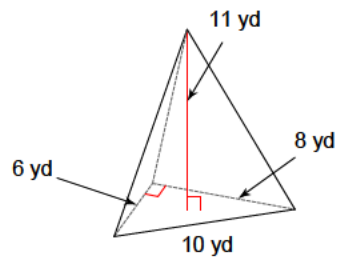
2)

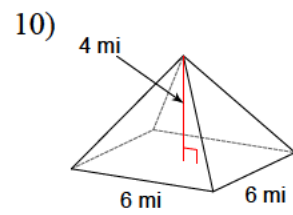
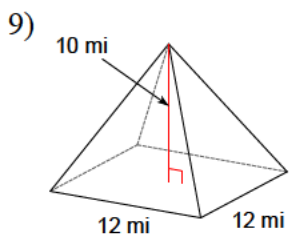
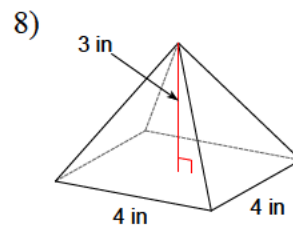
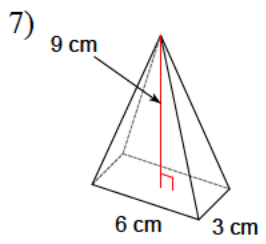
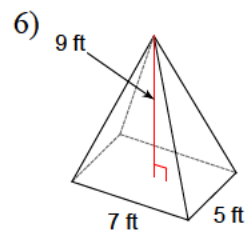
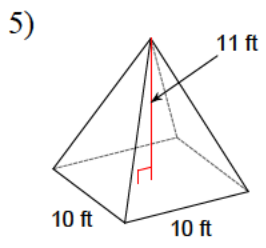


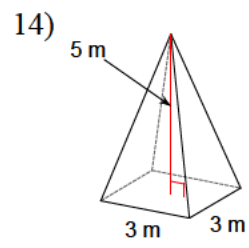
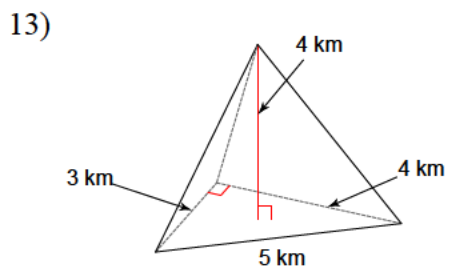
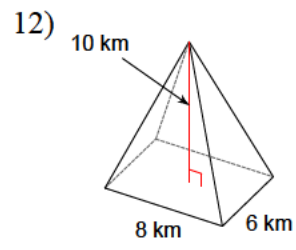
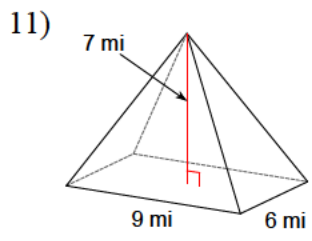
3)

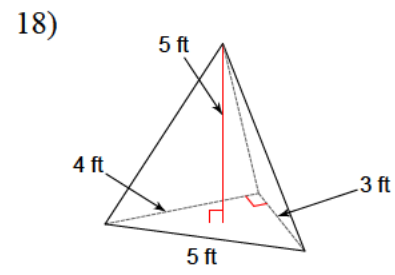
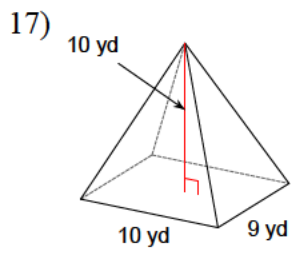
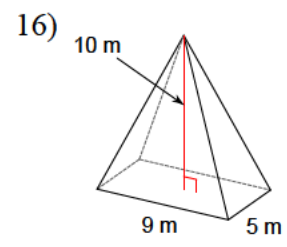
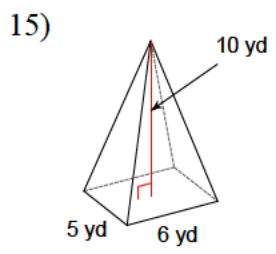


4)

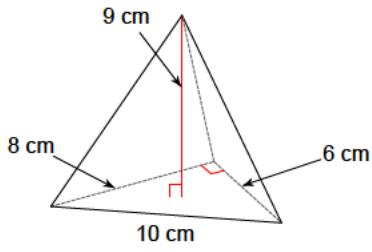




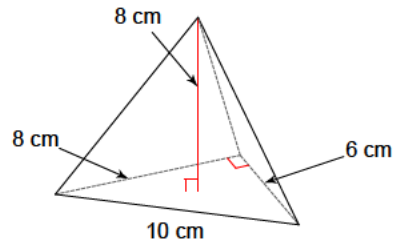




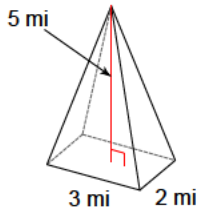
19)



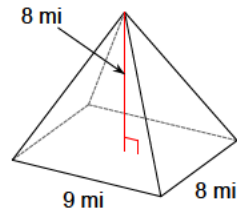
20)



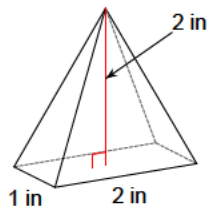
21)



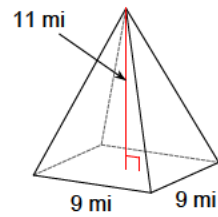
22)

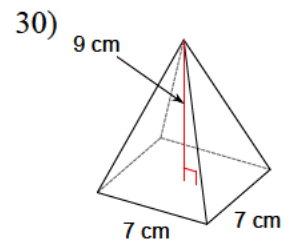
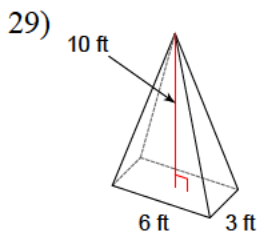
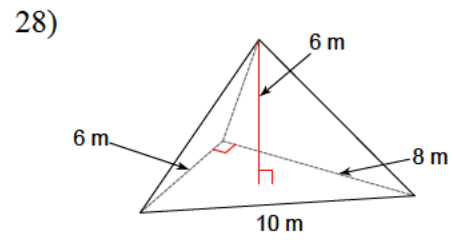
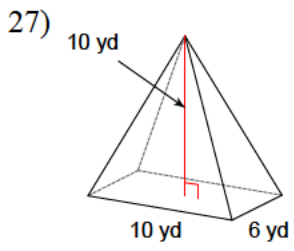
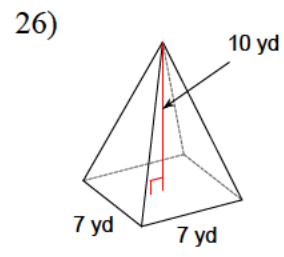
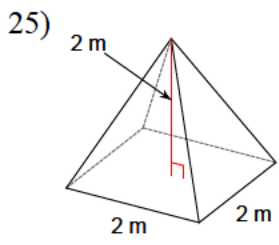


23)



24)





Answers to Solid figures - pyramids

- | | | | |
|--------------------------|---------------------------|-------------------------|-------------------------|
| 1) 56 yd ³ | 2) 26.7 m ³ | 3) 128 m ³ | 4) 88 yd ³ |
| 5) 366.7 ft ³ | 6) 105 ft ³ | 7) 54 cm ³ | 8) 16 in ³ |
| 9) 480 mi ³ | 10) 48 mi ³ | 11) 126 mi ³ | 12) 160 km ³ |
| 13) 8 km ³ | 14) 15 m ³ | 15) 100 yd ³ | 16) 150 m ³ |
| 17) 300 yd ³ | 18) 10 ft ³ | 19) 72 cm ³ | 20) 64 cm ³ |
| 21) 10 mi ³ | 22) 192 mi ³ | 23) 1.3 in ³ | 24) 297 mi ³ |
| 25) 2.7 m ³ | 26) 163.3 yd ³ | 27) 200 yd ³ | 28) 48 m ³ |
| 29) 60 ft ³ | 30) 147 cm ³ | | |