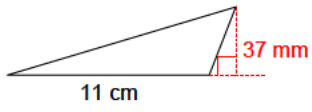


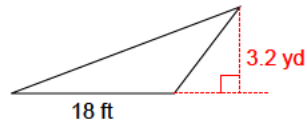
# Triangles - area

Use given information to find the area of each triangle.

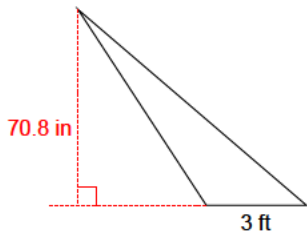
1)



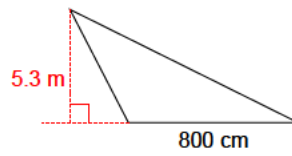
2)



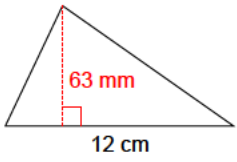
3)



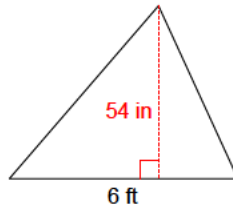
4)



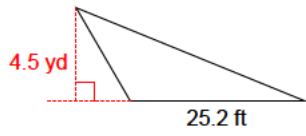
5)



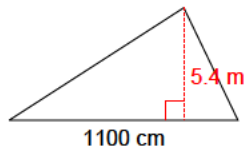
6)



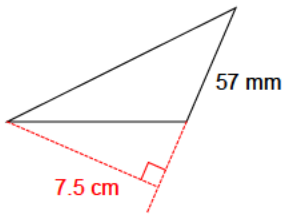
7)



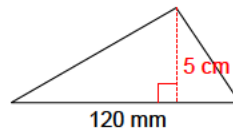
8)



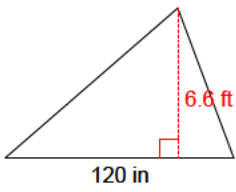
9)



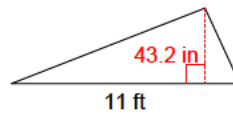
10)



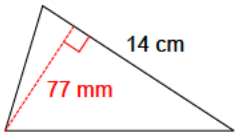
11)



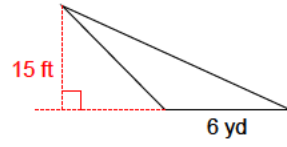
12)



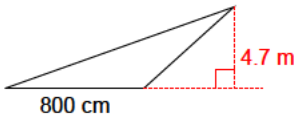
13)



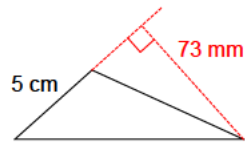
14)

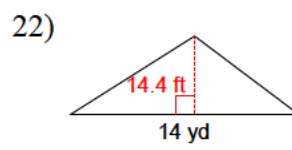
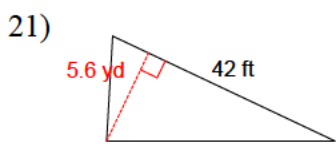
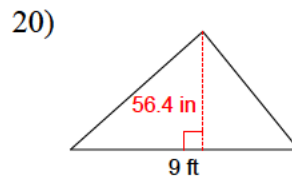
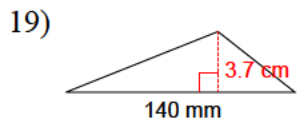
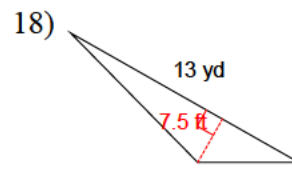
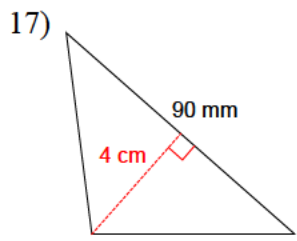


15)

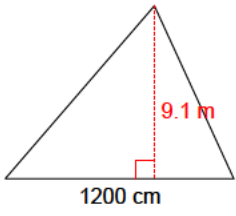


16)

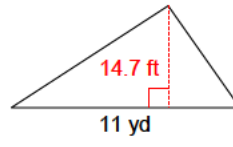




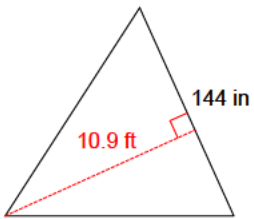
23)



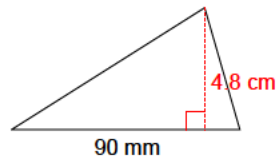
24)



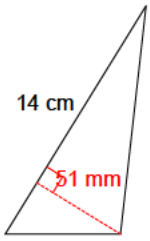
25)



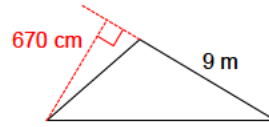
26)



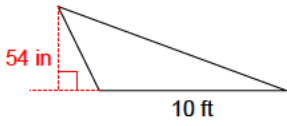
27)



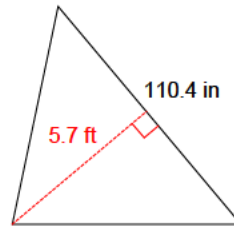
28)



29)



30)



## Answers to Triangles - area

- |                           |                           |                          |                           |
|---------------------------|---------------------------|--------------------------|---------------------------|
| 1) 20.35 cm <sup>2</sup>  | 2) 9.6 yd <sup>2</sup>    | 3) 8.85 ft <sup>2</sup>  | 4) 21.2 m <sup>2</sup>    |
| 5) 37.8 cm <sup>2</sup>   | 6) 13.5 ft <sup>2</sup>   | 7) 18.9 yd <sup>2</sup>  | 8) 29.7 m <sup>2</sup>    |
| 9) 21.375 cm <sup>2</sup> | 10) 30 cm <sup>2</sup>    | 11) 33 ft <sup>2</sup>   | 12) 19.8 ft <sup>2</sup>  |
| 13) 53.9 cm <sup>2</sup>  | 14) 15 yd <sup>2</sup>    | 15) 18.8 m <sup>2</sup>  | 16) 18.25 cm <sup>2</sup> |
| 17) 18 cm <sup>2</sup>    | 18) 16.25 yd <sup>2</sup> | 19) 25.9 cm <sup>2</sup> | 20) 21.15 ft <sup>2</sup> |
| 21) 39.2 yd <sup>2</sup>  | 22) 33.6 yd <sup>2</sup>  | 23) 54.6 m <sup>2</sup>  | 24) 26.95 yd <sup>2</sup> |
| 25) 65.4 ft <sup>2</sup>  | 26) 21.6 cm <sup>2</sup>  | 27) 35.7 cm <sup>2</sup> | 28) 30.15 m <sup>2</sup>  |
| 29) 22.5 ft <sup>2</sup>  | 30) 26.22 ft <sup>2</sup> |                          |                           |