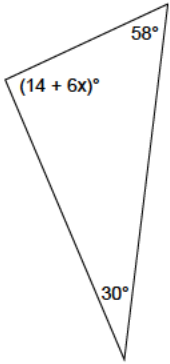


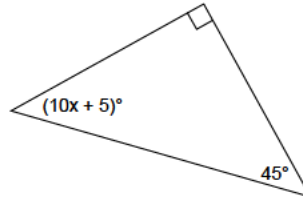
Triangles - equations with angles

Use these angle measures to solve each equation and find x .

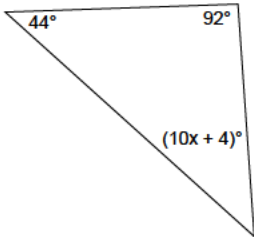
1)



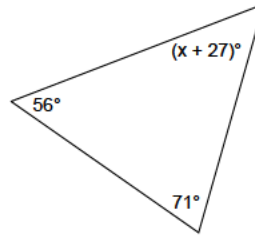
2)



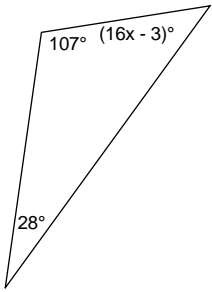
3)



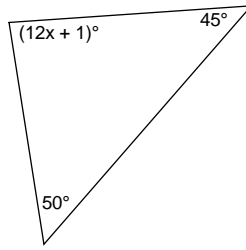
4)



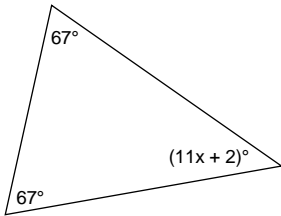
5)



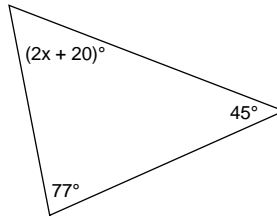
6)



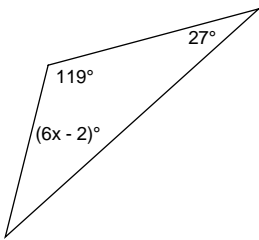
7)



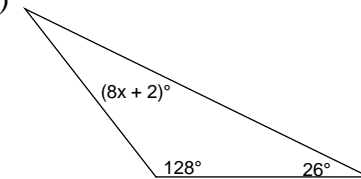
8)



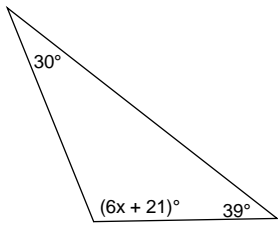
9)



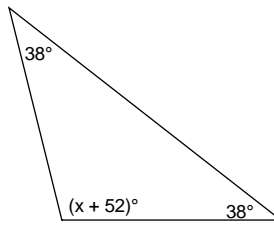
10)



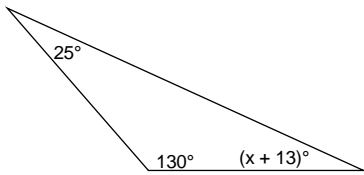
11)



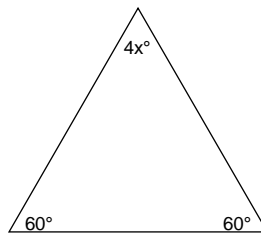
12)



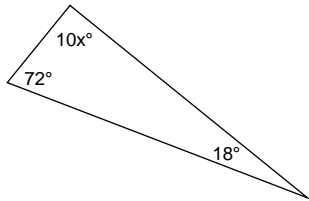
13)



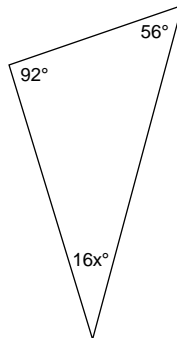
14)



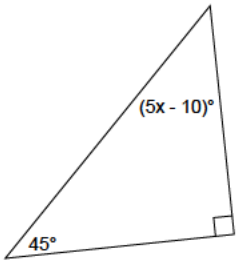
15)



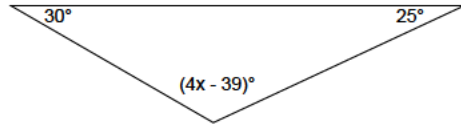
16)



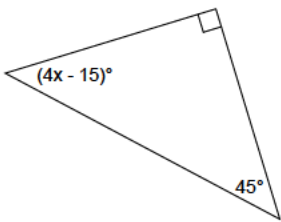
17)



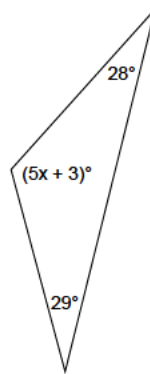
18)



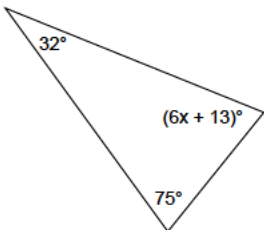
19)



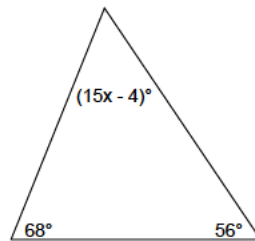
20)



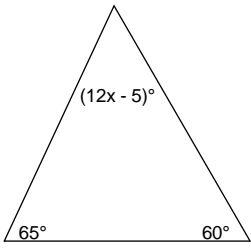
21)



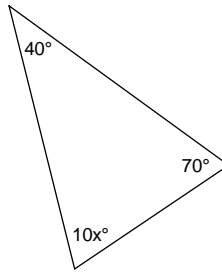
22)



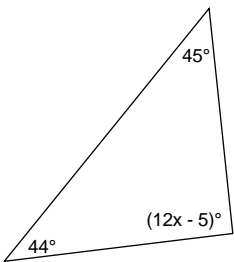
23)



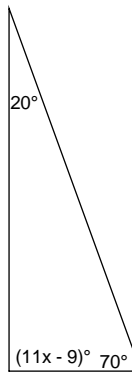
24)



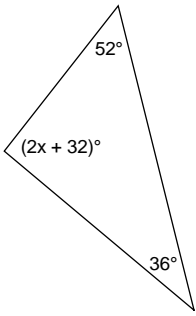
25)



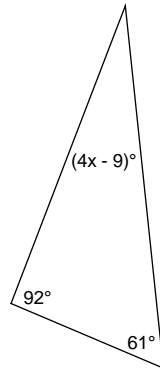
26)



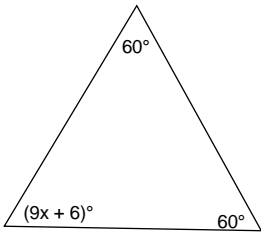
27)



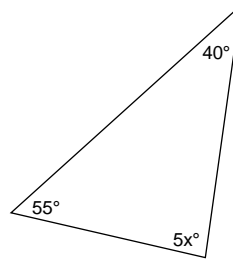
28)



29)



30)



Answers to Triangles - equations with angles

1) 13
5) 3
9) 6
13) 12
17) 11
21) 10
25) 8
29) 6

2) 4
6) 7
10) 3
14) 15
18) 41
22) 4
26) 9
30) 17

3) 4
7) 4
11) 15
15) 9
19) 15
23) 5
27) 30

4) 26
8) 19
12) 52
16) 2
20) 24
24) 7
28) 9